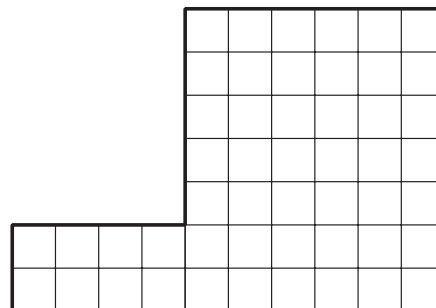


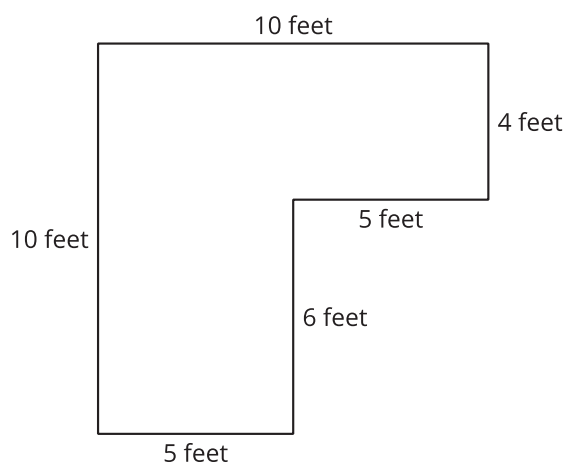
Section C: Practice Problems

1. What is the area of this figure in square units? Explain or show your reasoning.



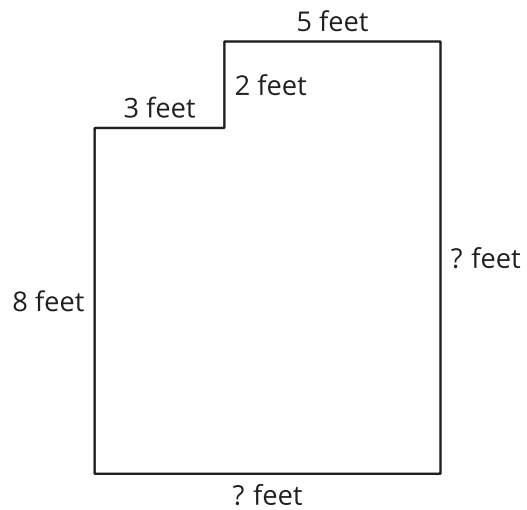
(From Unit 2, Lesson 12.)

2. Find the area of this figure. Explain or show your reasoning.



(From Unit 2, Lesson 13.)

3. Find the area of this figure. Explain or show your reasoning.

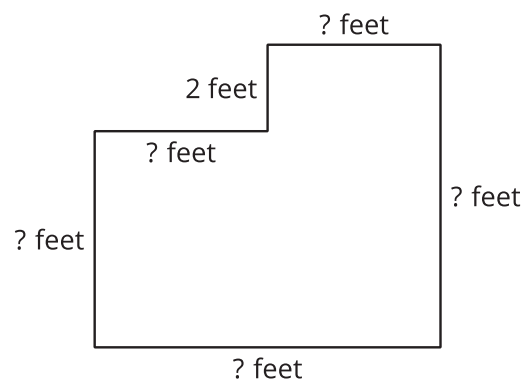


(From Unit 2, Lesson 14.)

4. Exploration

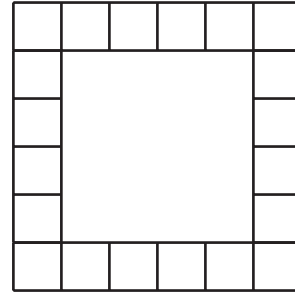
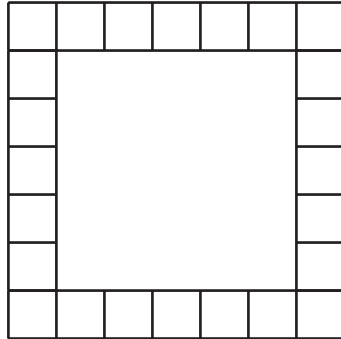
Lin says that she knows how to find the area of the figure. Diego says there is not enough information to find the area.

Do you agree with Lin or with Diego?
Explain your reasoning.



5. Exploration

- a. Each image shows part of a shape filled with squares.



For each image, which do you think is greater, the number of squares in the image or the number of squares missing in the middle?

- b. Check whether or not your answers are correct.