



# Count 2 Groups of Objects

Let's count objects in 2 groups.




## Warm-up


### Which Three Go Together: Groups

Which 3 go together?

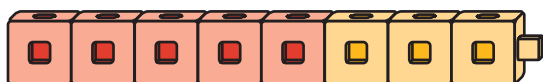
**A**



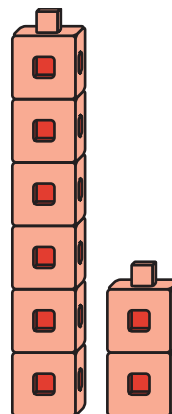
**B**



**C**



**D**



## Activity 1

# Put Together Pattern Blocks

How many do you have?

I have \_\_\_\_\_ pattern blocks.



## Activity 2

### Put Together Connecting Cubes

How many cubes do you have?

We have \_\_\_\_\_ cubes.

We have \_\_\_\_\_ cubes.




## Activity 3


# Introduce Tower Build—Count and Build to 10

Choose a center.

### Tower Build



### Math Libs



### Match Mine

