



Compare Numbers

Let's figure out which number is more and which is less.

Warm-up

Act It Out: Hand Out Paper

9 kids get blue paper.

5 kids get red paper.

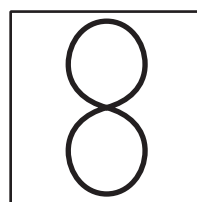

Did fewer kids get blue or red?

Activity 1

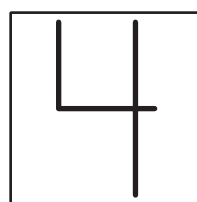
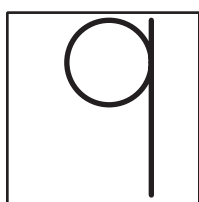
Which Number Is More?

Circle the number that is more.

1.



2.



Activity 2

Which Number Is Less?

Write the numbers you roll.
Circle the number that is less.

Write the numbers you roll.
Circle the number that is less.

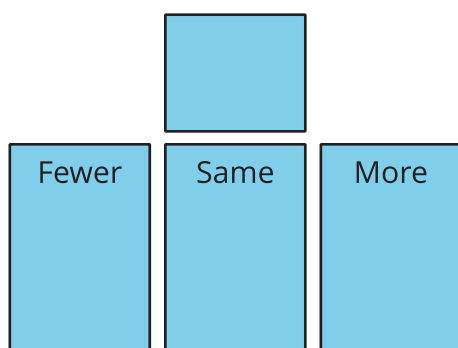


Activity 3


Centers: Choice Time

Choose a center.

Fewer, Same, More



Math Libs



Number Race


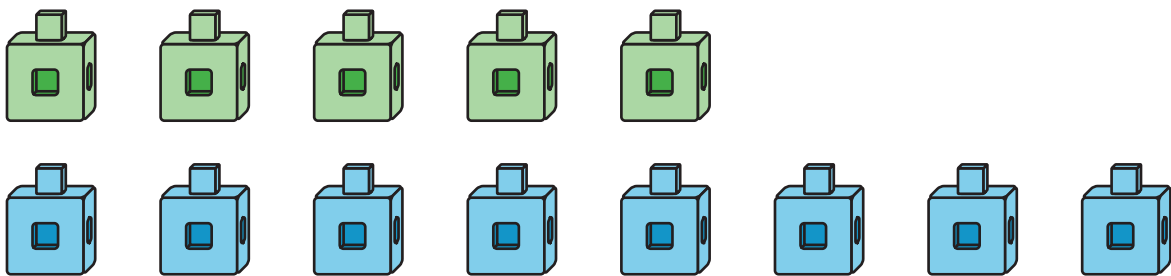


Section D Summary

We can compare numbers.

5

8



1, 2, 3, 4, **5**, 6, 7, **8**, 9, 10

5 is less than 8.

8 is more than 5.