

Graphs, Tables, Equations, and Situations, Spanish

Tarjeta 7

Mai tiene un negocio de quitar nieve. Ella cobra una tarifa fija de \$50 durante el invierno y \$5 adicionales si la nieve que debe quitar mide más de 6 pulgadas.

Llamemos x al número de nevadas que miden más de 6 pulgadas y llamemos y al costo de contratar a Mai, en dólares.

Graphs, Tables, Equations, and Situations, Spanish

Tarjeta 8

Priya usa 20 metros de cerca para hacer un gallinero rectangular. Va a usar la cerca en los 4 lados del gallinero.

Llamemos x al largo del gallinero, en metros, y y al ancho del gallinero, en metros.

Graphs, Tables, Equations, and Situations, Spanish

Tarjeta 9

| x | y |
|------|-------|
| 20 | 30 |
| 12 | 18 |
| 67.6 | 101.4 |

Graphs, Tables, Equations, and Situations, Spanish

Tarjeta 10

| x | y |
|-----|-----|
| 2 | 6 |
| 4 | 2 |
| 5 | 0 |

Graphs, Tables, Equations, and Situations, Spanish

Tarjeta 11

| x | y |
|-----|------|
| 6 | 3.60 |
| 10 | 6.00 |
| 12 | 7.20 |

Graphs, Tables, Equations, and Situations, Spanish

Tarjeta 12

| x | y |
|-----|-----|
| 3 | 3 |
| 2.5 | 2.5 |
| 3.2 | 3.2 |

Graphs, Tables, Equations, and Situations, Spanish

Tarjeta 13

| x | y |
|-----|-----|
| 5 | 5 |
| 4 | 6 |
| 3 | 7 |

Graphs, Tables, Equations, and Situations, Spanish

Tarjeta 14

| x | y |
|-----|-----|
| 0 | 50 |
| 2 | 60 |
| 5 | 75 |

Graphs, Tables, Equations, and Situations, Spanish

Tarjeta 15

| x | y |
|-----|-----|
| 0 | 50 |
| 2 | 40 |
| 7 | 15 |

Graphs, Tables, Equations, and Situations, Spanish

Tarjeta 16

| x | y |
|-----|-----|
| 0 | 15 |
| 7 | 8 |
| 10 | 5 |

Graphs, Tables, Equations, and Situations, Spanish

Tarjeta 17

$$2x + 2y = 20$$

Graphs, Tables, Equations, and Situations, Spanish

Tarjeta 18

$$y = 15 - x$$

Graphs, Tables, Equations, and Situations, Spanish

Tarjeta 19

$$y = 5x + 50$$

Graphs, Tables, Equations, and Situations, Spanish

Tarjeta 20

$$y = 0.60x$$

Graphs, Tables, Equations, and Situations, Spanish

Tarjeta 21

$$2x + 1y = 10$$

Graphs, Tables, Equations, and Situations, Spanish

Tarjeta 22

$$y = \frac{60x}{60}$$

Graphs, Tables, Equations, and Situations, Spanish

Tarjeta 23

$$1.5x = y$$

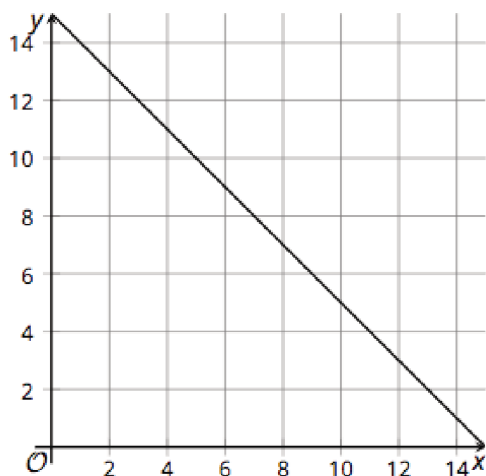
Graphs, Tables, Equations, and Situations, Spanish

Tarjeta 24

$$50 - 5x = y$$

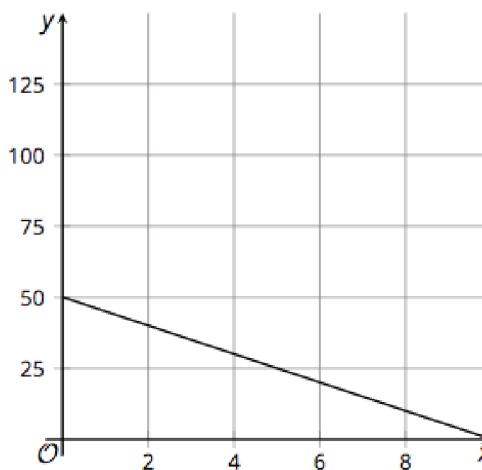
Graphs, Tables, Equations, and Situations, Spanish

Tarjeta 25



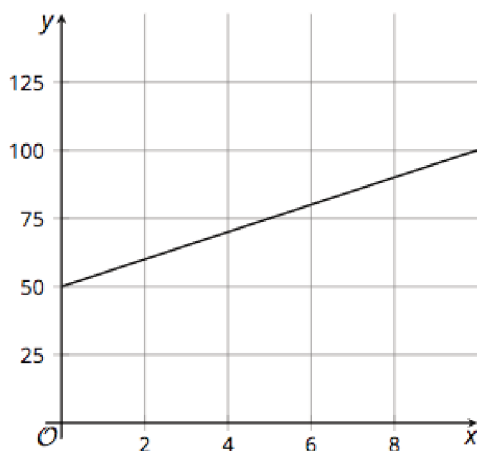
Graphs, Tables, Equations, and Situations, Spanish

Tarjeta 26



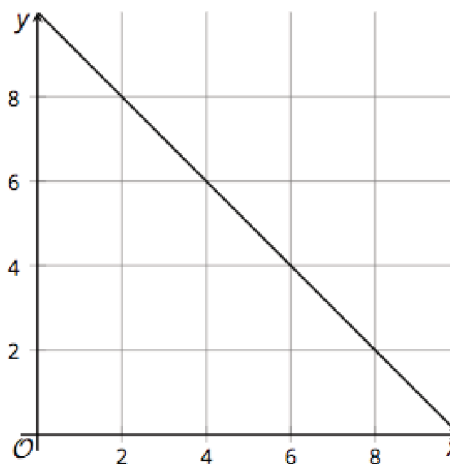
Graphs, Tables, Equations, and Situations, Spanish

Tarjeta 27

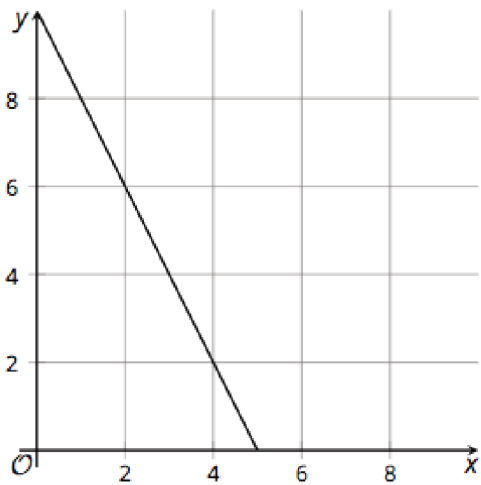


Graphs, Tables, Equations, and Situations, Spanish

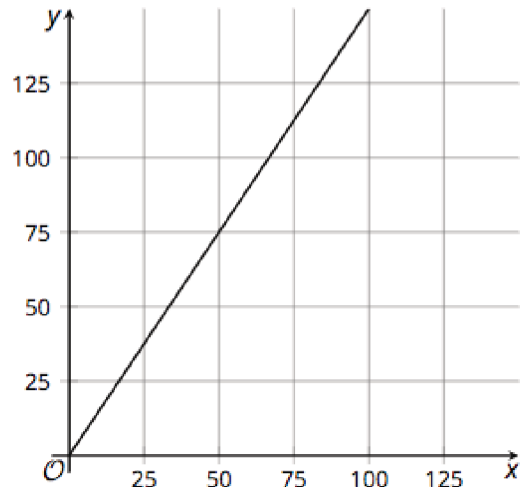
Tarjeta 28



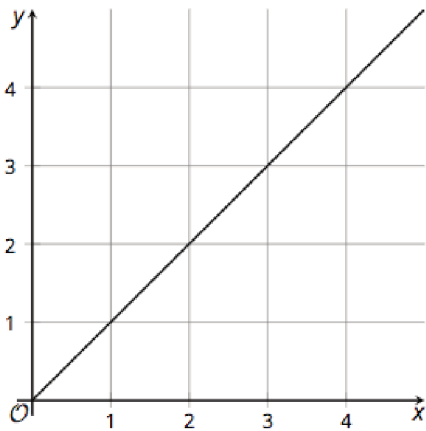
Graphs, Tables, Equations, and Situations, Spanish
Tarjeta 29



Graphs, Tables, Equations, and Situations, Spanish
Tarjeta 30



Graphs, Tables, Equations, and Situations, Spanish
Tarjeta 31



Graphs, Tables, Equations, and Situations, Spanish
Tarjeta 32

