



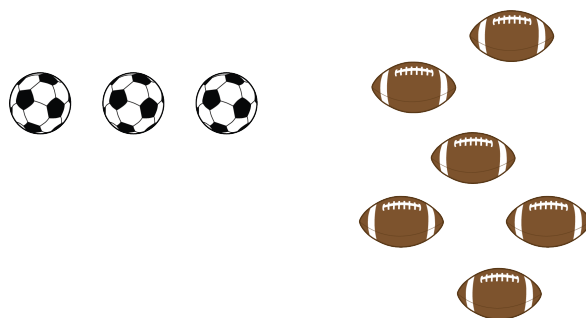
# Count 2 Groups of Scattered Images

Let's count things in 2 groups.

## Activity 1

### Count Organized and Scattered Images

1.

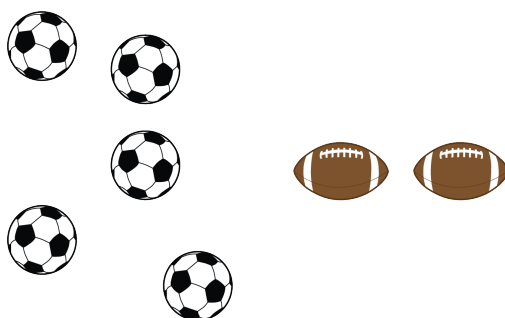


\_\_\_\_\_

-----

There are \_\_\_\_\_ balls.

2.




\_\_\_\_\_

-----

There are \_\_\_\_\_ balls.

3.




\_\_\_\_\_

-----

There are \_\_\_\_\_ balls.

4.



\_\_\_\_\_

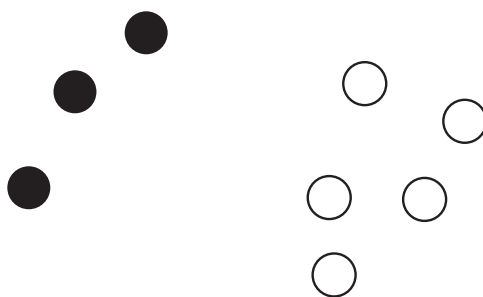
-----

There are \_\_\_\_\_ balls.

## Activity 2

### Count Scattered Images

1.




\_\_\_\_\_

-----

There are \_\_\_\_\_ circles.

2.

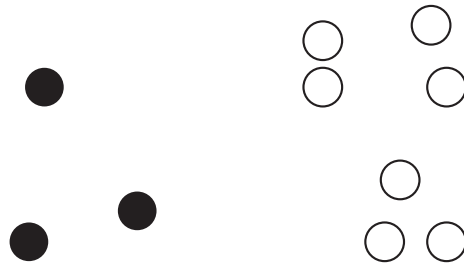


\_\_\_\_\_

-----

There are \_\_\_\_\_ circles.

3.



---


---

There are 

---

 circles.

4.



---

---

There are 

---

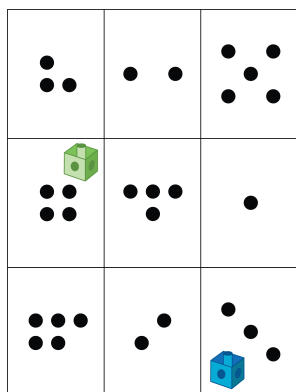
 circles.

## Activity 3

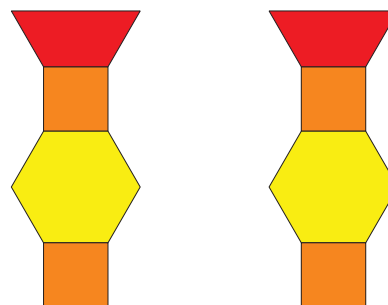
### Centers: Choice Time

Choose a center.


#### Roll and Add



#### Match Mine



#### Math Libs



#### Tower Build

