



Addition with a Ten

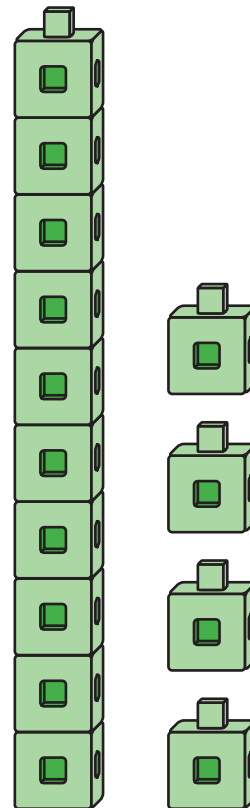
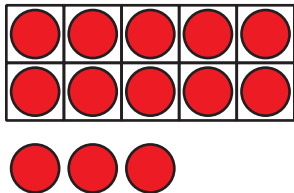
Let's use a ten to make teen numbers.

Warm-up

Notice and Wonder: Teen Numbers

What do you notice?

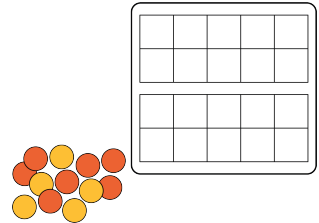
What do you wonder?



Activity 1

Make It: Teen Numbers and 10-frames

Use your 10-frames to build teen numbers.
Write an equation that matches the
teen number.



teen number	equation

If you have time, write another equation for each of the
teen numbers.

Activity 2

Equations With a Ten

Find the number that makes each equation true.

Show your thinking using drawings, numbers, or words.

1. $14 = 10 +$

2. $10 + 5 =$

3. $16 =$ $+ 6$

4. $10 + \square = 12$

5. $\square + 3 = 13$

6. $13 = \square + 10$