



Count 2 Groups of Objects

Let's count objects in 2 groups.




Warm-up


Which Three Go Together: Groups

Which 3 go together?

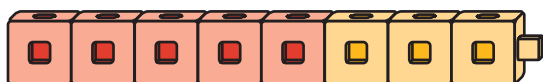
A



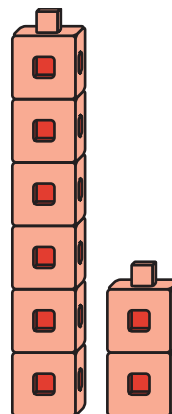
B



C



D



Activity 1

Put Together Pattern Blocks

How many do you have?

I have _____ pattern blocks.



Activity 2

Put Together Connecting Cubes

How many cubes do you have?

We have _____ cubes.

We have _____ cubes.




Activity 3


Introduce Tower Build—Count and Build to 10

Choose a center.

Tower Build



Math Libs



Match Mine

