



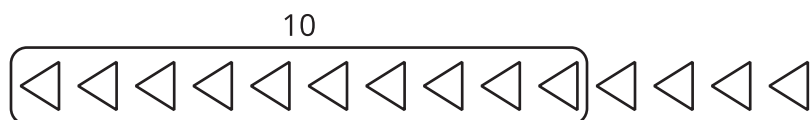
# Count Images (Part 1)

Let's find 10 shapes and count them.



## Activity 1

### Find 10 to Count




1.



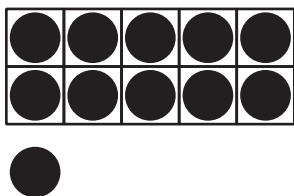
\_\_\_\_\_ squares

2.




\_\_\_\_\_  
rectangles

3.




\_\_\_\_\_ dots

4.




\_\_\_\_\_ hexagons

5.



\_\_\_\_\_ dots

6.




\_\_\_\_\_ triangles

## Activity 2

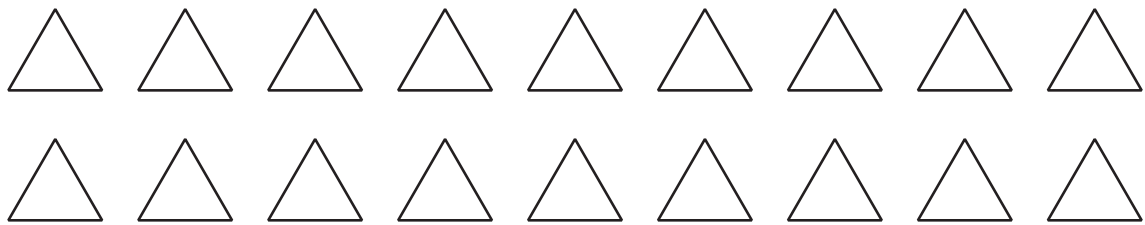
### Color to Match Expressions

1. Color the squares to show  $10 + 2$ .



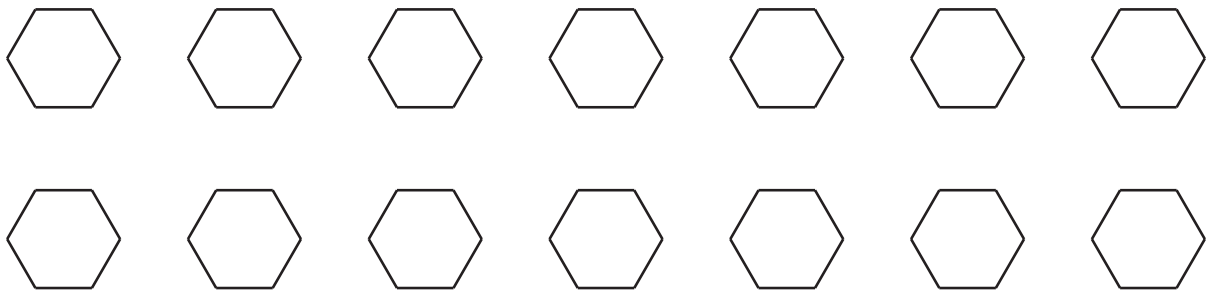
$$10 + 2 = \underline{\hspace{2cm}}$$

2. Color the triangles to show  $10 + 8$ .



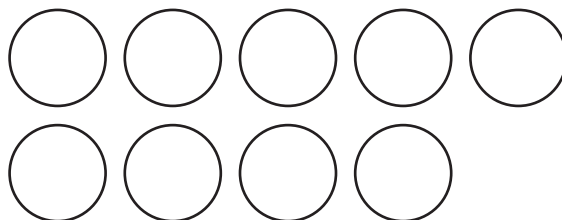
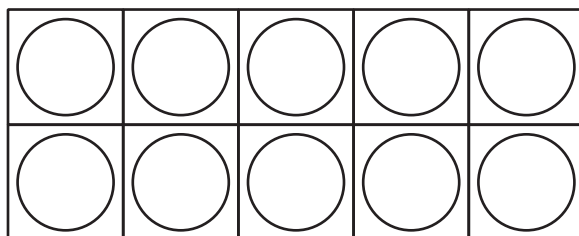
$$10 + 8 = \underline{\hspace{2cm}}$$

3. Color the hexagons to show  $10 + 4$ .



$$10 + 4 = \underline{\hspace{2cm}}$$

4. Color the circles to show  $10 + 9$ .



$$10 + 9 = \underline{\hspace{2cm}}$$

## Activity 3

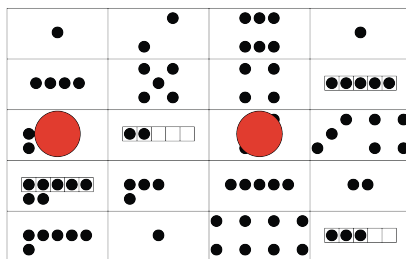
### Centers: Choice Time

Choose a center.

Find the Value of the Expressions

$$3 + 5 \quad 7 - 5$$

Make or Break Apart Numbers



Bingo

