



# Addition with a Ten

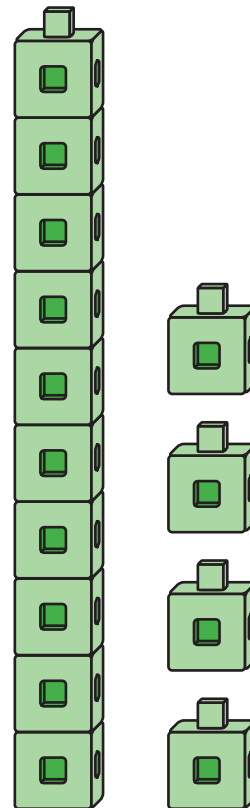
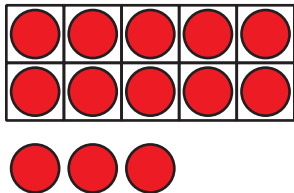
Let's use a ten to make teen numbers.

## Warm-up

## Notice and Wonder: Teen Numbers

What do you notice?

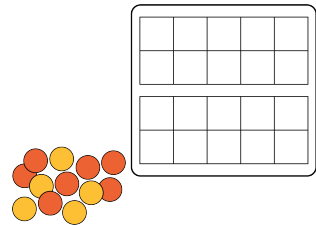
What do you wonder?



# Activity 1

## Make It: Teen Numbers and 10-frames

Use your 10-frames to build teen numbers.  
Write an equation that matches the  
teen number.



teen number	equation

If you have time, write another equation for each of the  
teen numbers.

## Activity 2

### Equations With a Ten

Find the number that makes each equation true.

Show your thinking using drawings, numbers, or words.

1.  $14 = 10 + \square$

2.  $10 + 5 = \square$

3.  $16 = \square + 6$

4.  $10 + \square = 12$

5.  $\square + 3 = 13$

6.  $13 = \square + 10$