

Card Sort: Sort and Find the Value  
A

$$65 - 36$$

Card Sort: Sort and Find the Value  
B

$$72 + 19$$

Card Sort: Sort and Find the Value  
C

$$92 - 63$$

Card Sort: Sort and Find the Value  
D

$$64 + 27$$

Card Sort: Sort and Find the Value  
E

$$35 + 42$$

Card Sort: Sort and Find the Value  
F

$$56 - 24$$

Card Sort: Sort and Find the Value  
G

$$83 - 58$$

Card Sort: Sort and Find the Value  
H

$$27 + 33$$

Card Sort: Sort and Find the Value

I

$$72 - 19$$

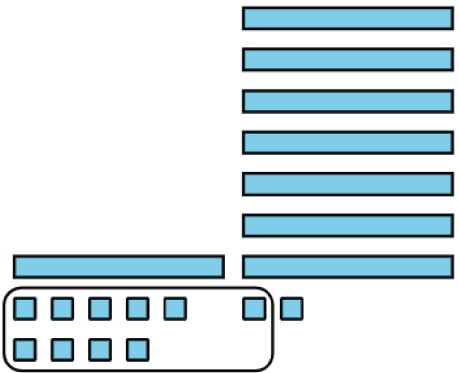
Card Sort: Sort and Find the Value

J




Card Sort: Sort and Find the Value

K



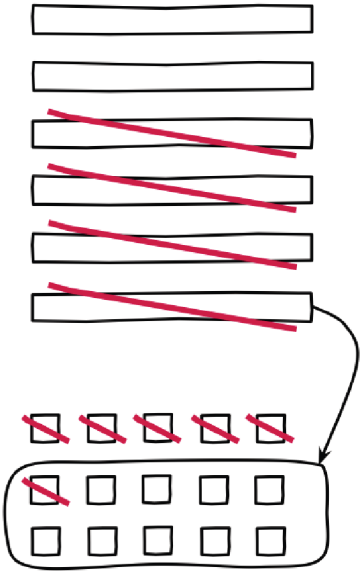
Card Sort: Sort and Find the Value

L



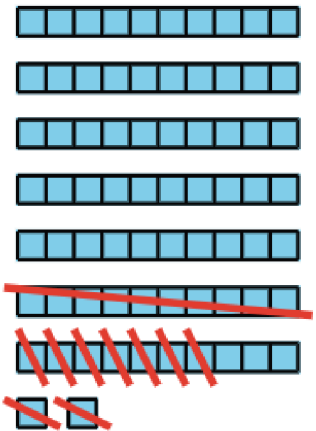
Card Sort: Sort and Find the Value

M



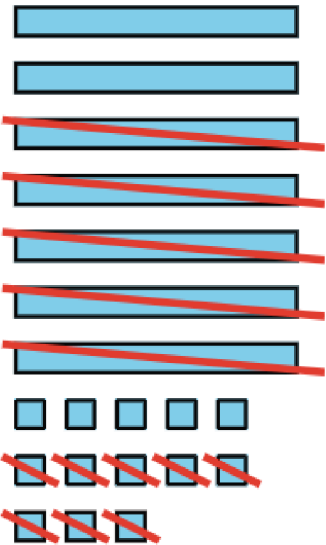
Card Sort: Sort and Find the Value

N



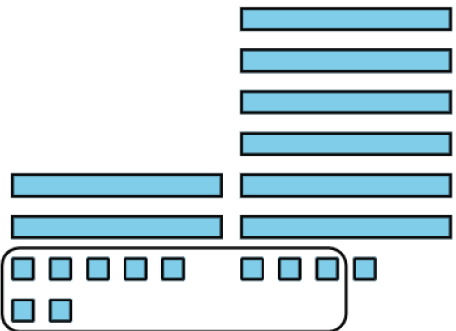
Card Sort: Sort and Find the Value

O

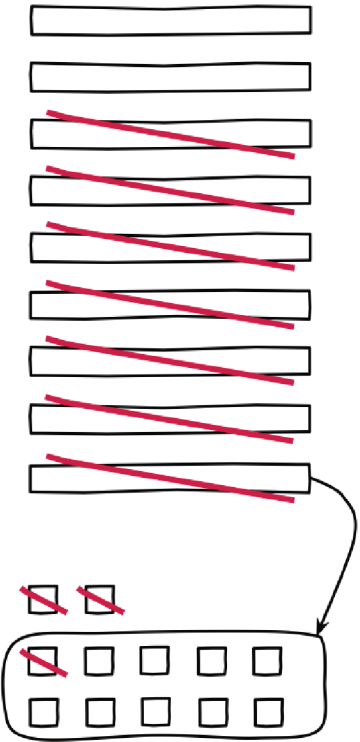


Card Sort: Sort and Find the Value

P



Q  
Card Sort: Sort and Find the Value



R  
Card Sort: Sort and Find the Value

