



# Find the Value of Expressions

Let's find the value of expressions.

Warm-up

**What Do You Know about  $3 + 2$ ?**

What do you know about  $3 + 2$ ?

## Activity 2

### Find the Value of Expressions

$3 + 1$

---

---

---

$6 - 3$

---

---

---

$5 - 4$

---

---

---



$7 + 2$

---

---

---

$5 + 0$

---

---

---

$9 - 4$

---

---

---

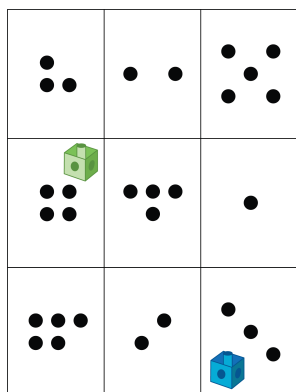


## Activity 3

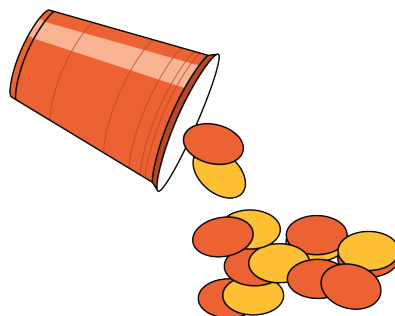
### Centers: Choice Time

Choose a center.


Roll and Add



Shake and Spill



Number Race



Math Stories

