

Represent Story Problem Cards

A - Represent Story Problems

There are 53 baseballs in a box. There are 25 fewer tennis balls than baseballs in the box. How many tennis balls are in the box?

B - Represent Story Problems

Jada collected some pine cones in the park. Han took 25 of Jada's pine cones and 53 pine cones were left. How many pine cones did Jada collect?

C - Represent Story Problems

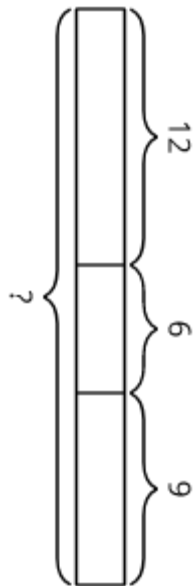
There are 12 pattern blocks in a bag. There are 6 more pattern blocks on the table than in the bag. Jada puts 9 more pattern blocks on the table. How many pattern blocks are on the table now?

D - Represent Story Problems

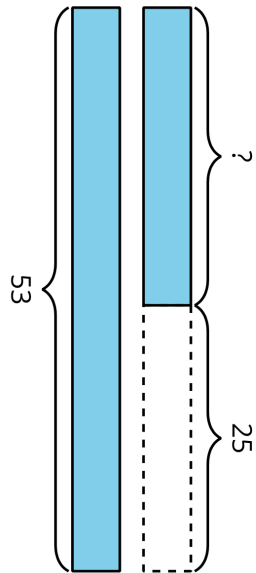
There are 12 puzzle pieces in the box. Diego puts 6 more puzzle pieces in the box. There are 9 more puzzle pieces in the box than there are on the table. How many puzzle pieces are on the table?

Represent Story Problem Cards

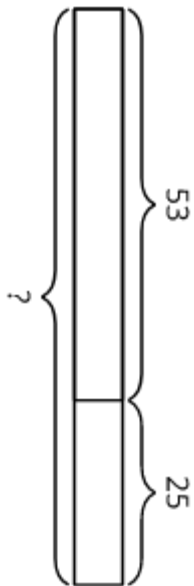
E - Represent Story Problems



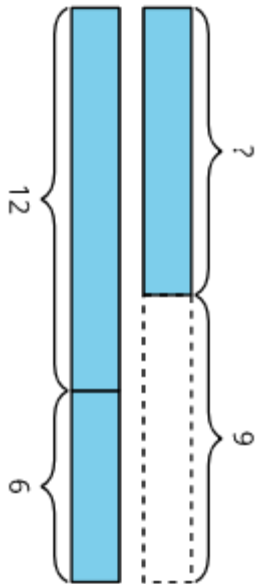
F - Represent Story Problems



G - Represent Story Problems



H - Represent Story Problems



Represent Story Problem Cards

I - Represent Story Problems

$$? - 25 = 53$$

J - Represent Story Problems

$$12 + 6 + 9 = ?$$

K - Represent Story Problems

$$? + 25 = 53$$

L - Represent Story Problems

$$12 + 6 - 9 = ?$$