

## Kindergarten Unit 8

Lesson 16

CC BY 2021 Illustrative Mathematics®

## Unit 8 Lesson 16: Parts to Make 5

### WU How Many Do You See: Add and Subtract (Warm up)

#### Student Task Statement

How many do you see?

How do you see them?



### 1 Revisit Shake and Spill, Cover

#### Student Task Statement

Put 3, 4, or 5 counters in the cup.

Shake and spill the counters.

Hide some of the counters under the cup.

Figure out how many of the counters are hidden.

Write an expression.

---

## 2 Missing Value (Optional)

### Student Task Statement

Fill in the missing part of each equation.

$3 - \underline{\quad} = 2$

$2 + \underline{\quad} = 2$

$5 - \underline{\quad} = 2$

$1 + \underline{\quad} = 2$

$5 - \underline{\quad} = 3$

$2 + \underline{\quad} = 3$

$4 - \underline{\quad} = 3$

$0 + \underline{\quad} = 3$

$5 - \underline{\quad} = 4$

$3 + \underline{\quad} = 4$

$4 - \underline{\quad} = 4$

$2 + \underline{\quad} = 4$

$1 + \underline{\quad} = 5$

$4 + \underline{\quad} = 5$

$5 - \underline{\quad} = 5$

$3 + \underline{\quad} = 5$

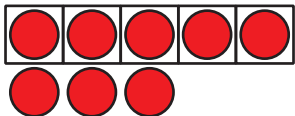
## 3 Centers: Choice Time




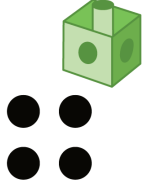




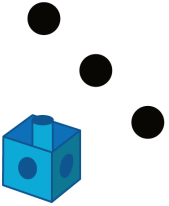
### Student Task Statement

Choose a center.

















5-frames

Roll and Add




Bingo

Geoblocks



Find the Value of Expressions

---

 $3+5$   $7-5$