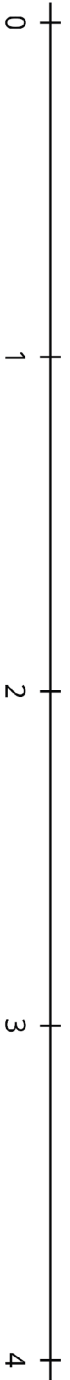


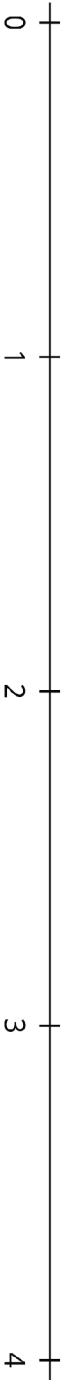
Round 1:



Use $>$, $<$, or $=$ to compare:

$\frac{\square}{\square}$	\square	$\frac{\square}{\square}$
---------------------------	-----------	---------------------------

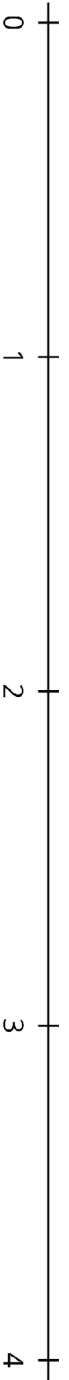
Round 2:



Use $>$, $<$, or $=$ to compare:

$\frac{\square}{\square}$	\square	$\frac{\square}{\square}$
---------------------------	-----------	---------------------------

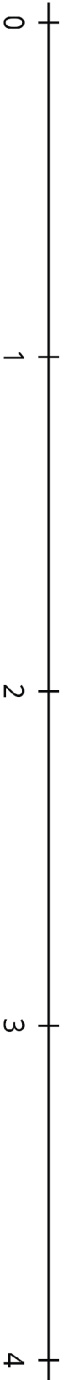
Round 3:



Use $>$, $<$, or $=$ to compare:

$\frac{\square}{\square}$	\square	$\frac{\square}{\square}$
---------------------------	-----------	---------------------------

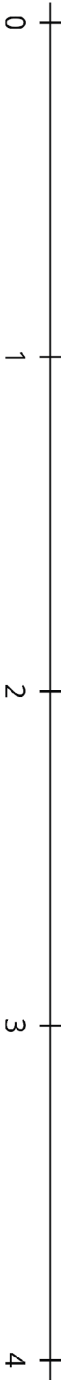
Round 4:



Use $>$, $<$, or $=$ to compare:

$\frac{\square}{\square}$	\square	$\frac{\square}{\square}$
---------------------------	-----------	---------------------------

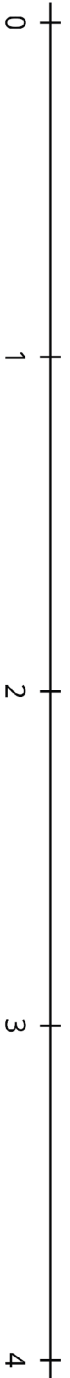
Round 5:



Use $>$, $<$, or $=$ to compare:

$\frac{\square}{\square}$	\square	$\frac{\square}{\square}$
---------------------------	-----------	---------------------------

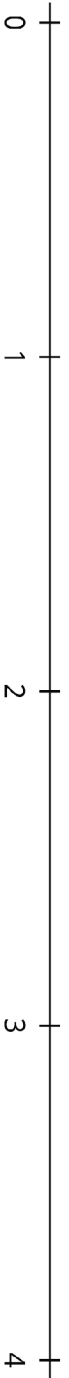
Round 6:



Use $>$, $<$, or $=$ to compare:

$\frac{\square}{\square}$	\square	$\frac{\square}{\square}$
---------------------------	-----------	---------------------------

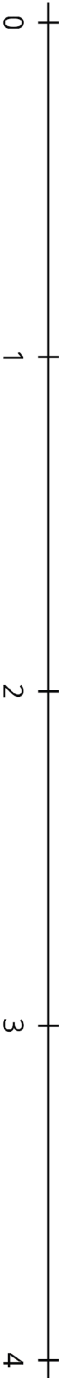
Round 7:



Use $>$, $<$, or $=$ to compare:

$\frac{\square}{\square}$	\square	$\frac{\square}{\square}$
---------------------------	-----------	---------------------------

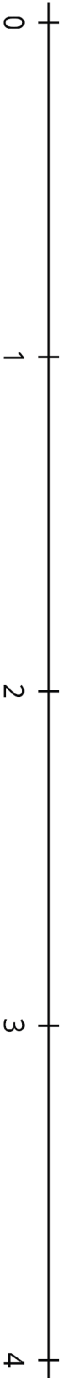
Round 8:



Use $>$, $<$, or $=$ to compare:

$\frac{\square}{\square}$	\square	$\frac{\square}{\square}$
---------------------------	-----------	---------------------------

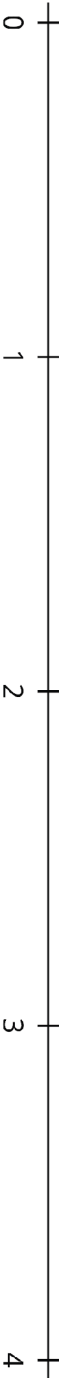
Round 9:



Use $>$, $<$, or $=$ to compare:

$\frac{\square}{\square}$	\square	$\frac{\square}{\square}$
---------------------------	-----------	---------------------------

Round 10:



Use $>$, $<$, or $=$ to compare:

$\frac{\square}{\square}$	\square	$\frac{\square}{\square}$
---------------------------	-----------	---------------------------