

Represent Story Problem Cards

A - Represent Story Problems

There are 53 baseballs in a box.
There are 25 fewer tennis balls
than baseballs in the box. How
many tennis balls are in the box?

B - Represent Story Problems

Jada collected some pine cones in
the park. Han took 25 of Jada's pine
cones and 53 pine cones were left.
How many pine cones did Jada
collect?

C - Represent Story Problems

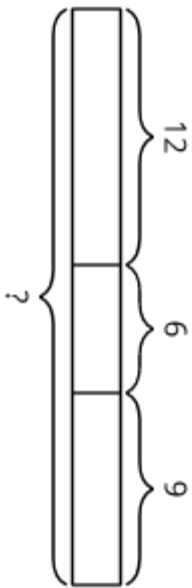
There are 12 pattern blocks in a
bag. There are 6 more pattern
blocks on the table than in the bag.
Jada puts 9 more pattern blocks on
the table. How many pattern
blocks are on the table now?

D - Represent Story Problems

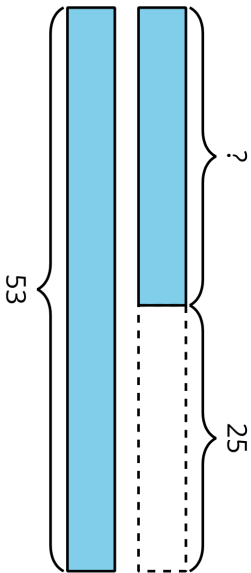
There are 12 puzzle pieces in the
box. Diego puts 6 more puzzle
pieces in the box. There are 9 more
puzzle pieces in the box than there
are on the table. How many puzzle
pieces are on the table?

Represent Story Problem Cards

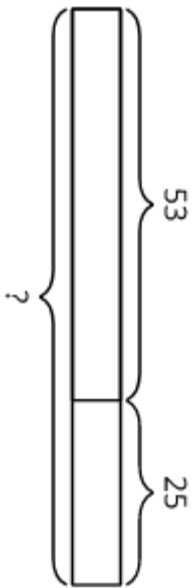
E - Represent Story Problems



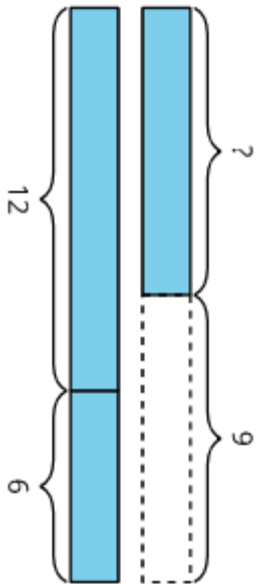
F - Represent Story Problems



G - Represent Story Problems



H - Represent Story Problems



Represent Story Problem Cards

I - Represent Story Problems

$$? - 25 = 53$$

J - Represent Story Problems

$$12 + 6 + 9 = ?$$

K - Represent Story Problems

$$? + 25 = 53$$

L - Represent Story Problems

$$12 + 6 - 9 = ?$$