

Card Sort: Giant Pumpkins

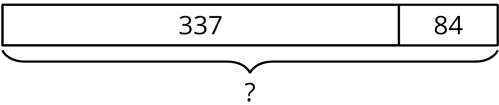
Giant Pumpkins

A

Giant pumpkins grow from seedlings. A farmer used 84 liters to water their seedlings with 12 liters each. How many seedlings were there?

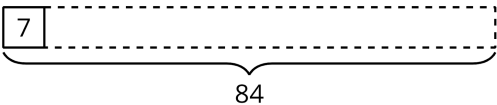
Giant Pumpkins

B



Giant Pumpkins

C



Giant Pumpkins

D

One farmer says he used 337 liters each day to water his giant pumpkin. Another farmer used 84 liters less each day. How much water did she use each day?

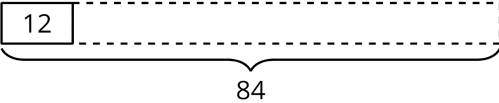
Giant Pumpkins

E

A father and a daughter use 337 liters each day to water their pumpkin and 84 liters a day to water their watermelon. How much water do they use all together each day?

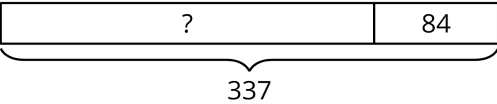
Giant Pumpkins

F



Giant Pumpkins

G



Giant Pumpkins

H

A giant pumpkin gained 12 kilograms each day for 7 days. How much weight did the pumpkin gain during that week?

Giant Pumpkins

I

A pack of giant pumpkin seeds weighs 7 grams. A farmer has 84 grams of seeds. How many packs does she have?

Giant Pumpkins

J

