



Numbers with Tens and Ones

Let's learn more about tens and ones.



Warm-up

Notice and Wonder: 1-and 2-digit Numbers

Set A

0

1

2

3

4

5

6

7

8

9

Set B

10

23

45

76

89



Activity 1

Make It: Tens and Ones

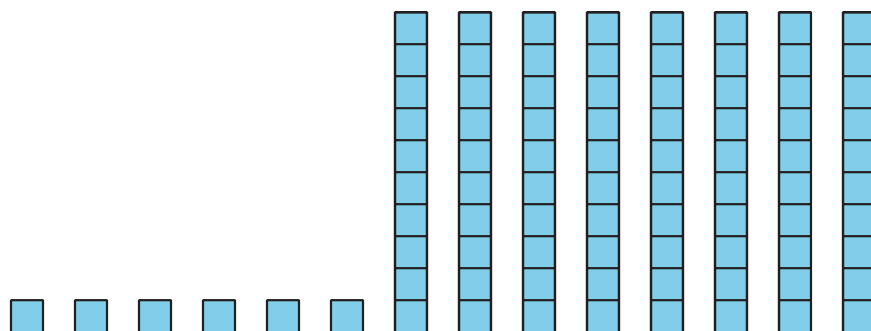
2-digit number	drawing	____ tens ____ ones

2-digit number	drawing	____ tens ____ ones



Activity 2

Who Do You Agree With?



Clare says this shows 68 (sixty-eight).

Diego says this shows 86 (eighty-six).

Who do you agree with?

Explain your reasoning.


I agree with _____ because

Activity 3

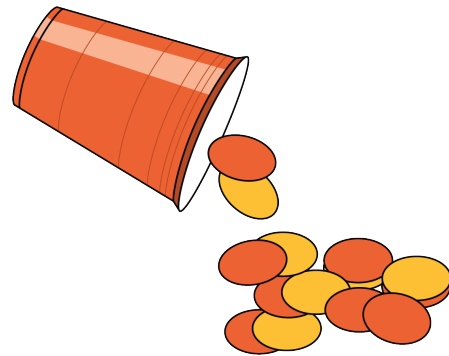
Centers: Choice Time

Choose a center.

Counting Collections



Shake and Spill



How Close?

+ = _____

Check It Off

