



Count Images (Part 1)

Let's find 10 shapes and count them.



Activity 1

Find 10 to Count




1.



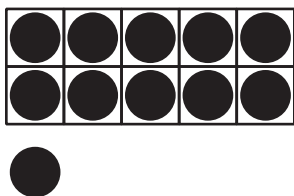
_____ squares

2.



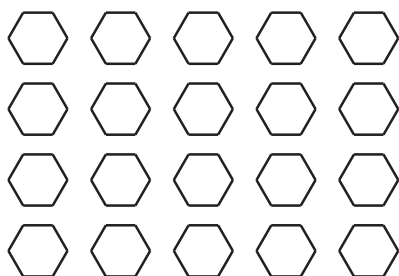
rectangles

3.




_____ dots

4.




_____ hexagons

5.



_____ dots

6.




_____ triangles

Activity 2

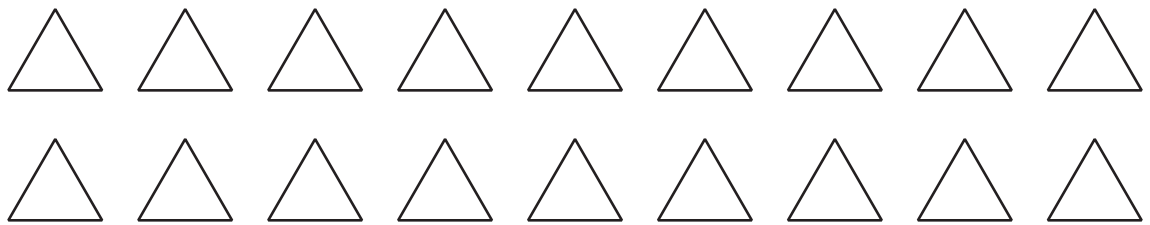
Color to Match Expressions

1. Color the squares to show $10 + 2$.



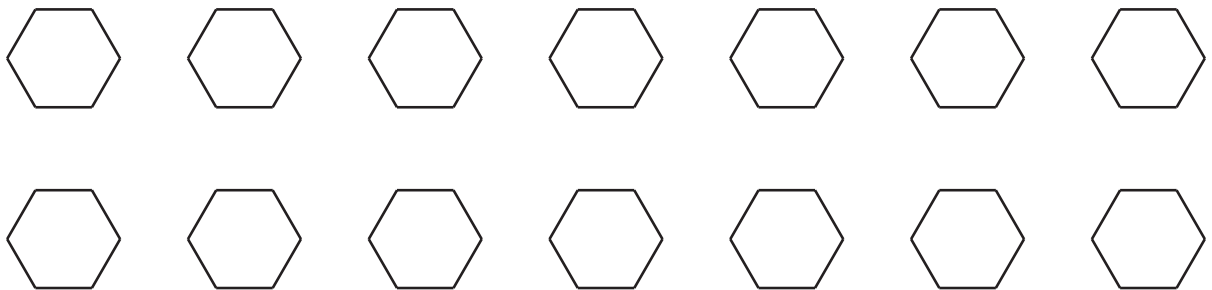
$$10 + 2 = \underline{\hspace{2cm}}$$

2. Color the triangles to show $10 + 8$.



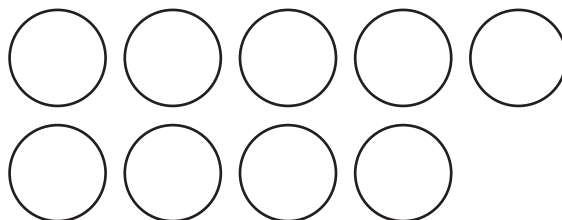
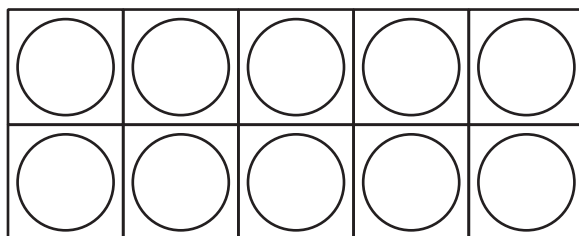
$$10 + 8 = \underline{\hspace{2cm}}$$

3. Color the hexagons to show $10 + 4$.



$$10 + 4 = \underline{\hspace{2cm}}$$

4. Color the circles to show $10 + 9$.



$$10 + 9 = \underline{\hspace{2cm}}$$

Activity 3

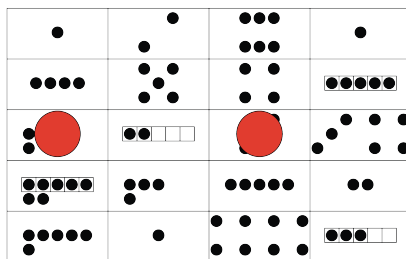
Centers: Choice Time

Choose a center.

Find the Value of the Expressions

$$3 + 5 \quad 7 - 5$$

Make or Break Apart Numbers



Bingo

