

Fraction Match Part 1

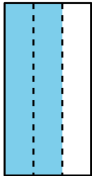
Fraction Match Part 1  
A

$$2 \div 2$$

Fraction Match Part 1  
E

$$4 \div 6$$

Fraction Match Part 1  
I



Fraction Match Part 1  
M



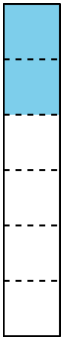
Fraction Match Part 1  
B

$$2 \div 3$$

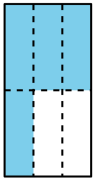
Fraction Match Part 1  
F

$$5 \div 8$$

Fraction Match Part 1  
J



Fraction Match Part 1  
N



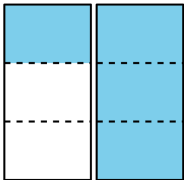
Fraction Match Part 1  
C

$$2 \div 4$$

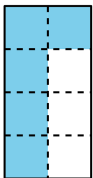
Fraction Match Part 1  
G

$$7 \div 8$$

Fraction Match Part 1  
K



Fraction Match Part 1  
O



Fraction Match Part 1  
D

$$2 \div 6$$

Fraction Match Part 1  
H

$$4 \div 3$$

Fraction Match Part 1  
L



Fraction Match Part 1  
P

