



Logarithmic Functions

Let's graph log functions.

22.1 Which Three Go Together: Functions

Which three go together? Why do they go together?

A

$$A(x) = 4 \cdot (0.75)^x$$

B

$$B(x) = 4 \cdot e^{(0.75x)}$$

C

$$C(x) = (0.75) \cdot 4^x$$

D

$$D(x) = 4 \cdot \log x$$

22.2 How Long Will It Take?

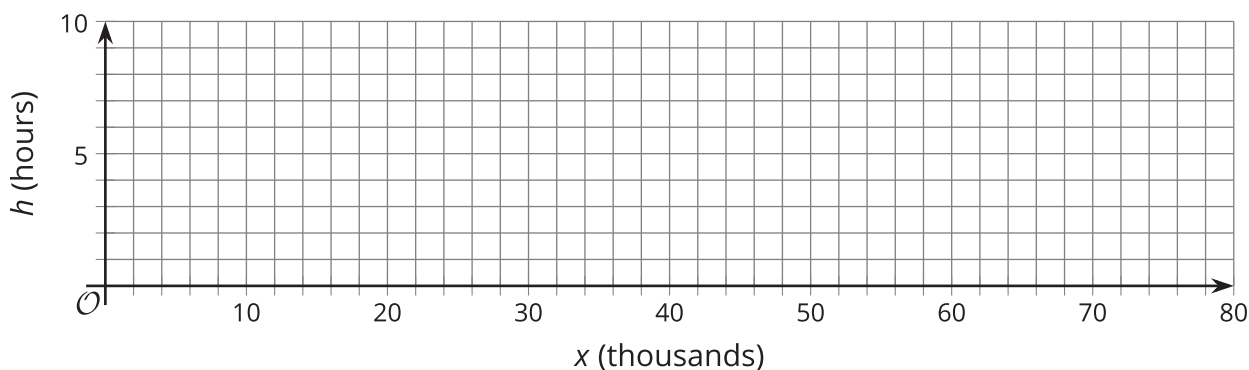
A colony of 1,000 bacteria doubles in population every hour.

- 1. Explain why we can write $h = \log_2 x$ to represent the number of hours, h , it takes for the one thousand bacteria to reach a population of x thousand.
- 2. Complete the table with the corresponding values of h .

x (thousands)	1	2	4	8	16	50	80
h (hours)							

- 3. Plot the pairs of values on the coordinate plane. Then sketch a curve that connects the points. Make two observations about the graph.





4. Use the graph to estimate the missing values in the table.

x (thousands)	10	24	72
h (hours)			

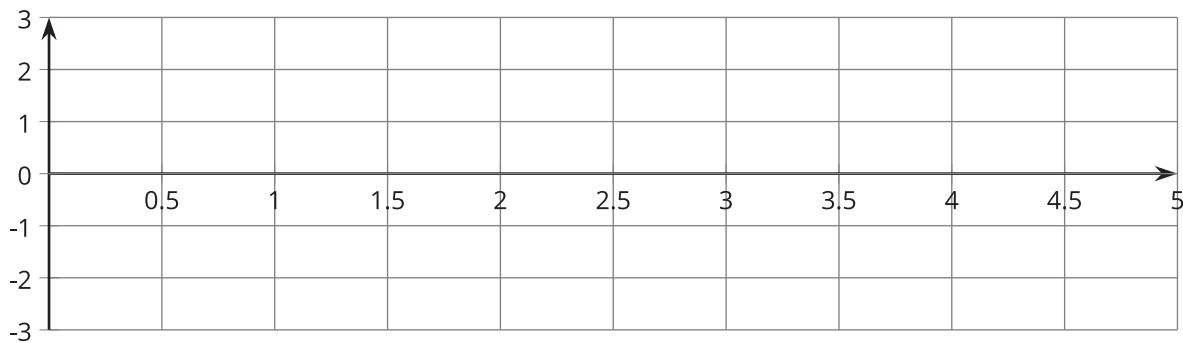
22.3 Another Logarithmic Function

Suppose the function d , defined by $d(x) = \log_{10} x$, represents the number of days it takes 1 thousand of another species of bacteria to reach a population of x , in thousands.

- Describe how the population is changing over time.
- Graph $y = \log_{10} x$ using graphing technology. Make two observations about the graph.
- Use your graph to estimate the values of $d(50)$ and $d(20,000)$. (Adjust your graphing window as needed.) Explain what each value means in this situation.
- Estimate or find the population after 5 days.
- Will the graph ever have a point on it for which $d(x) = 100$? Explain or show your reasoning.

Are you ready for more?

- Without graphing, how do you think the graphs of the equations $y = \log_2(x)$ and $y = \log_{10}(x)$ compare? Do they ever meet?
- Graph both equations on the same axes to test your conjectures.

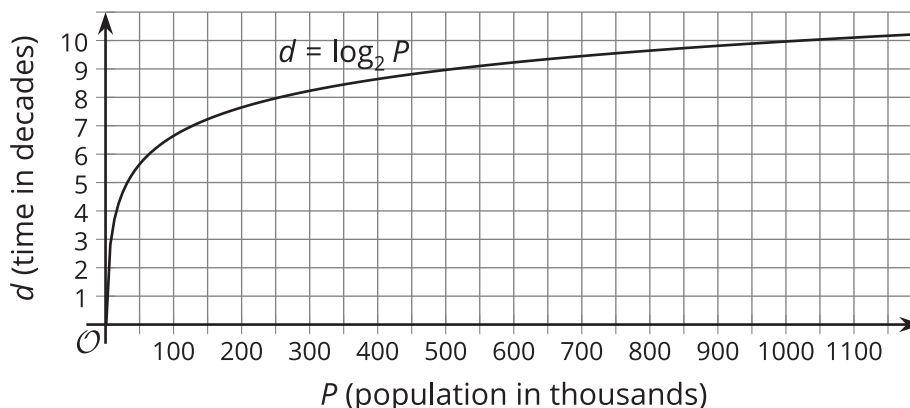


Lesson 22 Summary

Earlier, we studied exponential relationships where the input values are the exponent in the function. Sometimes we want to express an exponential relationship where the values we want to find, the outputs, are the exponents. A **logarithmic function**, or a function of the form $f(x) = k \log_a(x)$, where k is a constant and a is a positive number, can help us do that.

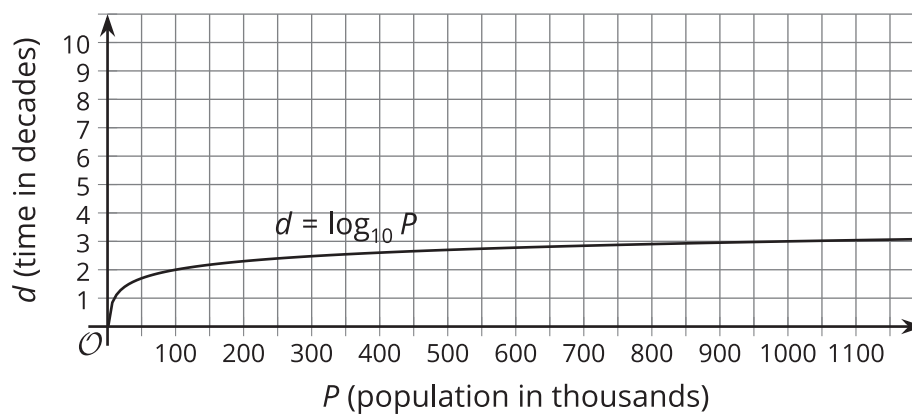
For example: Suppose the population of a town starts at one thousand and doubles every decade since first measured. We can write $P = 1 \cdot 2^d$ (or $P = 2^d$) to represent the population, in thousands, after d decades.

But if we want to know how long, in decades, it would take to reach certain population sizes, in thousands, we can write a logarithmic function $d = \log_2 P$. In this function, the input is P , population in thousands, and the output is d , time in decades. Here is a graph representing that function.



We can use the graph to estimate the answer to a question such as, “How many decades will it take for the population to reach a million?” by finding the value 1,000 (1,000 thousands is 1 million) on the horizontal axis and following that up to see that the graph has a point near (1,000, 10). This means that the population will reach 1 million after about 10 decades. We can check the answer by finding that $2^{10} = 1,024$. Suppose the population of that town expands by a factor of 10 every decade instead of by a factor of 2. The function representing the time it takes to

reach a certain population, in thousands, would be $d = \log_{10} P$.



From the graph, we can see that it takes only 3 decades to reach 1,000 thousands, because the point $(1,000, 3)$ appears to be on the graph (and $10^3 = 1,000$).