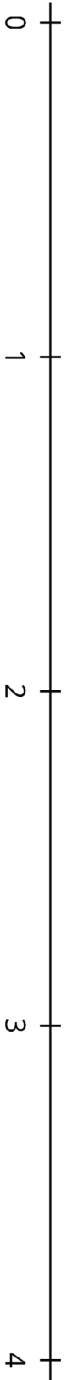


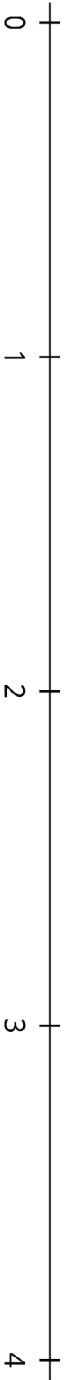
Round 1:



Use  $>$ ,  $<$ , or  $=$  to compare:

$\frac{\square}{\square}$	$\square$	$\frac{\square}{\square}$
---------------------------	-----------	---------------------------

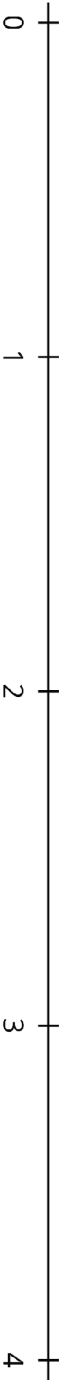
Round 2:



Use  $>$ ,  $<$ , or  $=$  to compare:

$\frac{\square}{\square}$	$\square$	$\frac{\square}{\square}$
---------------------------	-----------	---------------------------

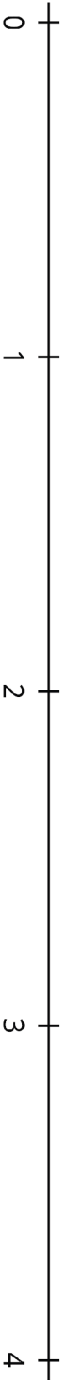
Round 3:



Use  $>$ ,  $<$ , or  $=$  to compare:

$\frac{\square}{\square}$	$\square$	$\frac{\square}{\square}$
---------------------------	-----------	---------------------------

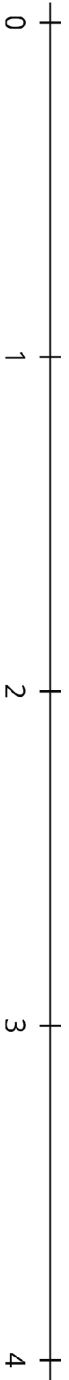
Round 4:



Use  $>$ ,  $<$ , or  $=$  to compare:

$\frac{\square}{\square}$	$\square$	$\frac{\square}{\square}$
---------------------------	-----------	---------------------------

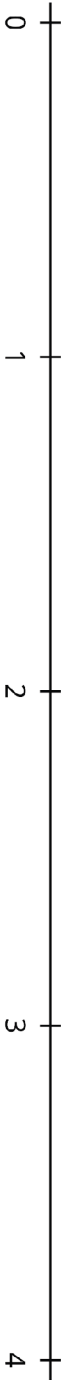
Round 5:



Use  $>$ ,  $<$ , or  $=$  to compare:

$\frac{\square}{\square}$	$\square$	$\frac{\square}{\square}$
---------------------------	-----------	---------------------------

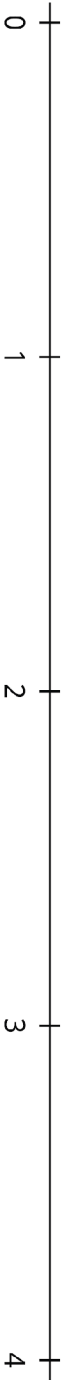
Round 6:



Use  $>$ ,  $<$ , or  $=$  to compare:

$\frac{\square}{\square}$	$\square$	$\frac{\square}{\square}$
---------------------------	-----------	---------------------------

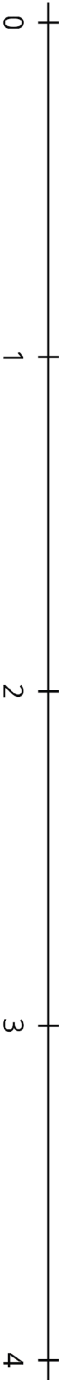
Round 7:



Use  $>$ ,  $<$ , or  $=$  to compare:

$\frac{\square}{\square}$	$\square$	$\frac{\square}{\square}$
---------------------------	-----------	---------------------------

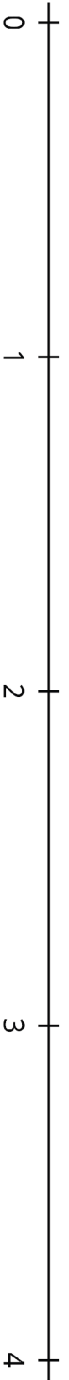
Round 8:



Use  $>$ ,  $<$ , or  $=$  to compare:

$\frac{\square}{\square}$	$\square$	$\frac{\square}{\square}$
---------------------------	-----------	---------------------------

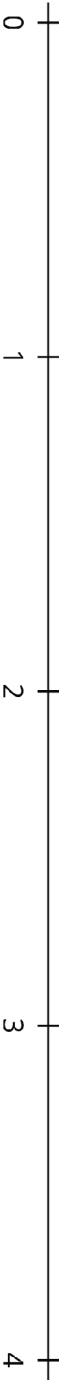
Round 9:



Use  $>$ ,  $<$ , or  $=$  to compare:

$\frac{\square}{\square}$	$\square$	$\frac{\square}{\square}$
---------------------------	-----------	---------------------------

Round 10:



Use  $>$ ,  $<$ , or  $=$  to compare:

$\frac{\square}{\square}$	$\square$	$\frac{\square}{\square}$
---------------------------	-----------	---------------------------