

Card Sort: Story Problems and Diagrams

A

Elena gathers 52 orange seeds. She gathers 39 more apple seeds than orange seeds.

How many apple seeds does she gather?

Card Sort: Story Problems and Diagrams

B

Elena started with 39 apple seeds. Then she gathered more apple seeds. Now she has 52 apple seeds.

How many seeds did Elena gather?

Card Sort: Story Problems and Diagrams

C

Elena gathers some apple seeds and 39 orange seeds. She gathers 52 seeds all together.

How many apple seeds does she gather?

Card Sort: Story Problems and Diagrams

D

Jada started with some seeds. Then she won 28 seeds from Elena. Now she has 65 seeds.

How many seeds did Jada have at the start?

Card Sort: Story Problems and Diagrams  
E

Elena wins 65 seeds. Jada wins 28 seeds.  
How many more seeds does Elena win than Jada?

Card Sort: Story Problems and Diagrams  
F

Elena has 65 seeds on her side of the game board. Jada has 28 seeds on her side.  
How many seeds are on the game board in all?

Card Sort: Story Problems and Diagrams  
G

Jada won 77 seeds in the first game she played. She won 19 fewer seeds in the second game.  
How many seeds did Jada win in the second game?

Card Sort: Story Problems and Diagrams  
H

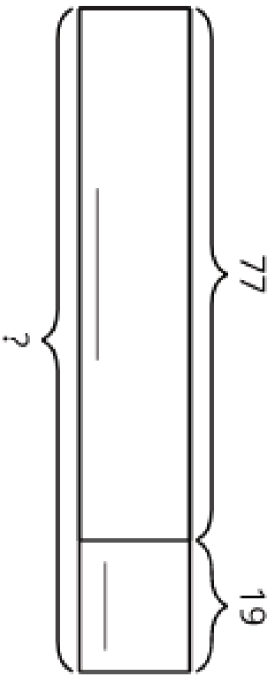
Jada started a game with 77 seeds. She won 19 more seeds.  
How many seeds does she have now?

Card Sort: Story Problems and Diagrams  
I

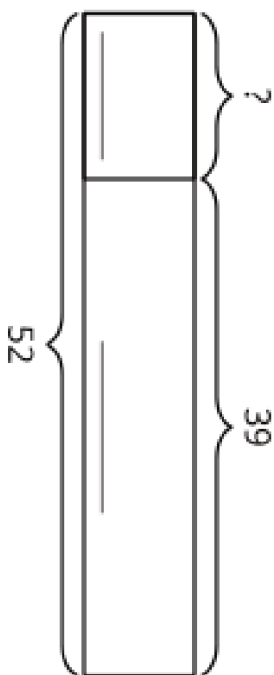
Jada starts her turn with only 19 seeds. Now she has 77 seeds.

How many seeds does she win during her turn?

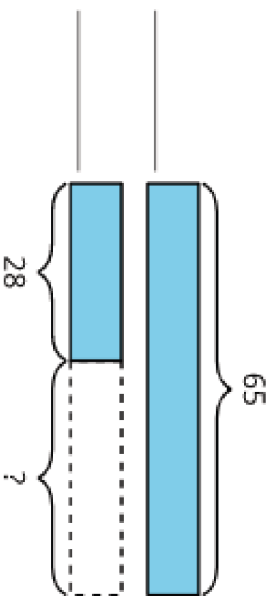
Card Sort: Story Problems and Diagrams  
K



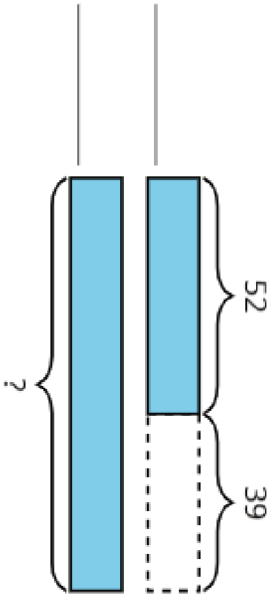
Card Sort: Story Problems and Diagrams  
J



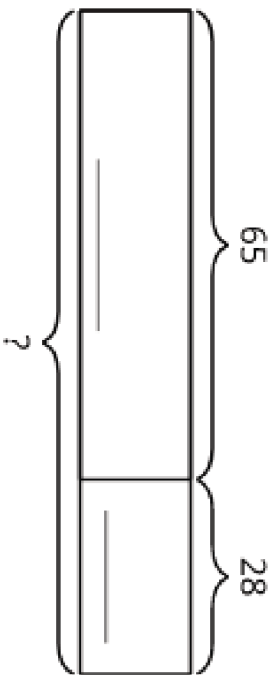
Card Sort: Story Problems and Diagrams  
L



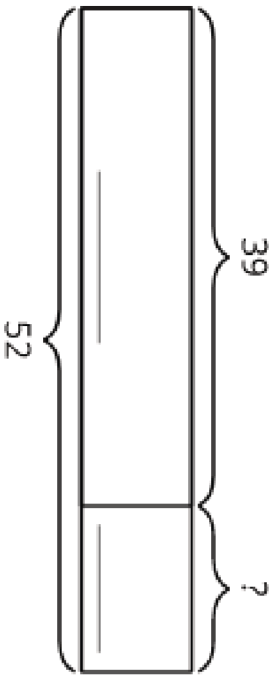
Card Sort: Story Problems and Diagrams  
M



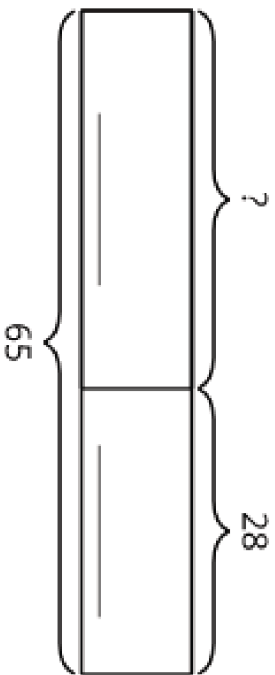
Card Sort: Story Problems and Diagrams  
N



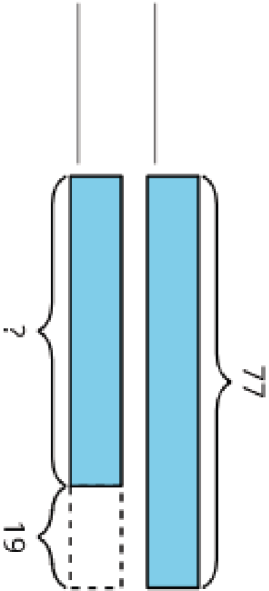
Card Sort: Story Problems and Diagrams  
O



Card Sort: Story Problems and Diagrams  
P



Card Sort: Story Problems and Diagrams  
Q



Card Sort: Story Problems and Diagrams  
R

