

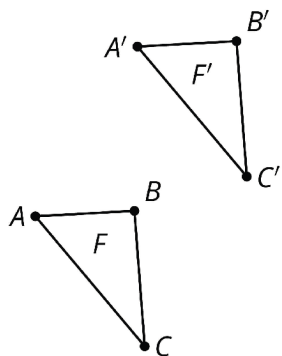
Name That Image
Card AName That Image
Card 1

Figure F has been rotated 180° around one of its vertices.

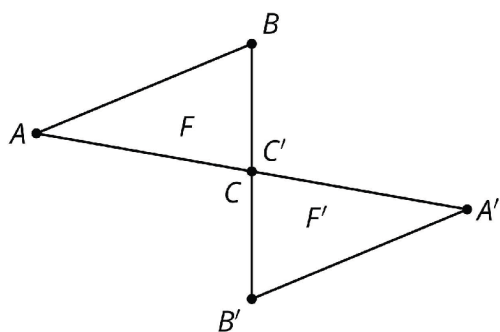
Name That Image
Card BName That Image
Card 2

Figure F has been rotated 180° around a point.

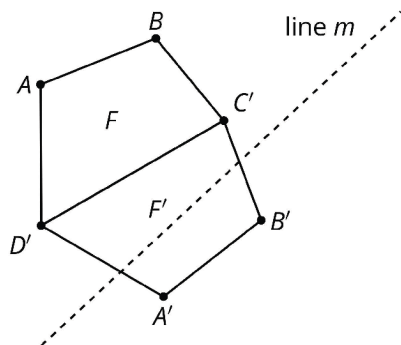
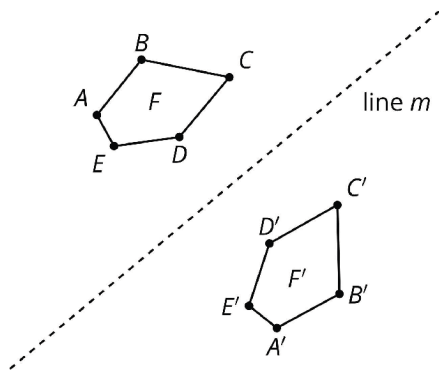
Name That Image
Card CName That Image
Card 3

Figure F is reflected over line m .

Name That Image

Card D



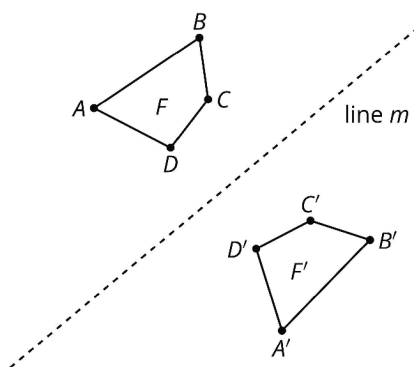
Name That Image

Card 4

Figure F is translated by a directed segment with negative slope.

Name That Image

Card E



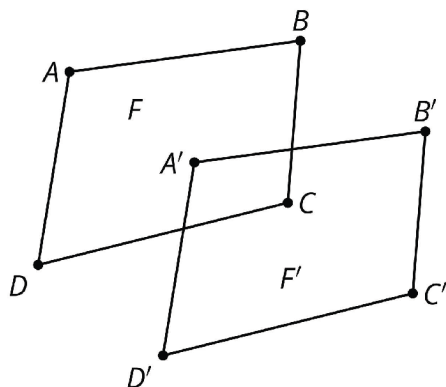
Name That Image

Card 5

Figure F is reflected over side CD .

Name That Image

Card F



Name That Image

Card 6

Figure F is translated by a directed line segment that has a positive slope.