

One of the Pieces, All of the Pieces


Let's describe equal pieces of shapes.

Warm-up


Which Three Go Together: Split Shapes

Which 3 go together?

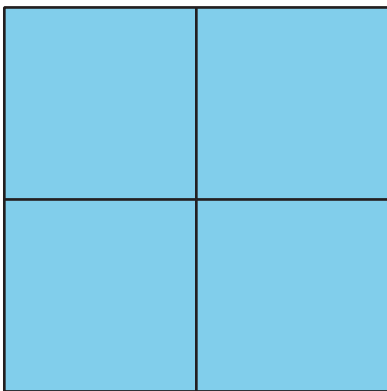
A



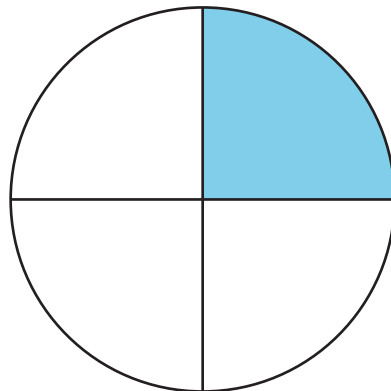
B



C




D



Activity 1


Color a Piece

1. Split the square into halves.



Color in 1 of the halves.
How much of the square is colored in?

2. Split the circle into fourths.



Color in 1 of the fourths.
How much of the circle is colored in?

Activity 2

Card Sort: Shaded Pieces

Sort your cards into these categories.

A fourth or a quarter
is shaded.

A half is shaded.

The whole shape
is shaded.

The pieces are
not equal.




Activity 3

Describe Equal Pieces

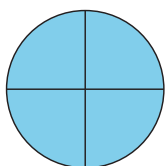
Pick 1 or more of these phrases to describe each shape.

- Split into fourths
- Split into halves
- Split into quarters
- Half shaded
- A quarter shaded
- A fourth shaded
- 2 halves shaded
- 4 fourths shaded


1.



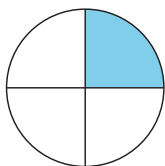
2.



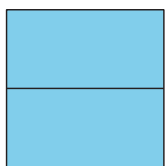
3.



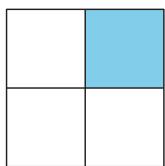
4.



5.



6.



7.

