

Grade 2 Unit 1

Lesson 2

CC BY 2021 Illustrative Mathematics®

Unit 1 Lesson 2: Relate Addition and Subtraction within 10**WU What Do You Know About 10? (Warm up)**

Student Task Statement

What do you know about 10?

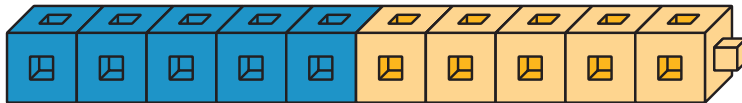
1 Revisit What's Behind My Back, 10 Cubes

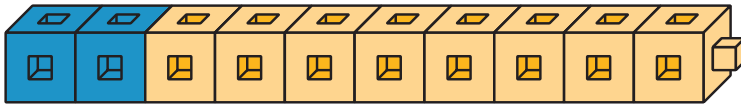
Student Task Statement

2 Sums of 10

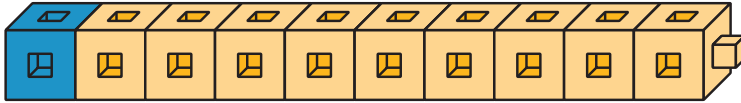
Student Task Statement

1. For each cube tower, write as many equations as you can think of that represent the cubes.

A**B****C****D**



E



2. Find the number that makes each equation true. Then write the letter of the cube tower that represents the equation.

$$3 + \underline{\quad} = 10$$

Letter:

$$10 - 7 = \underline{\quad}$$

Letter:

$$10 - 5 = \underline{\quad}$$

Letter:

$$2 + \underline{\quad} = 10$$

Letter:

$$10 - 1 = \underline{\quad}$$

Letter:

$$10 - 2 = \underline{\quad}$$

Letter:

$$\underline{\quad} + 6 = 10$$

Letter:

$$\underline{\quad} + 9 = 10$$

Letter:

$$5 + \underline{\quad} = 10$$

Letter:

$$10 - \underline{\quad} = 4$$

Letter: