

Sort and Find the Value

Sort and Find the Value

A

$$65 - 36$$

Sort and Find the Value

B

$$72 + 19$$

Sort and Find the Value

C

$$92 - 63$$

Sort and Find the Value

D

$$64 + 27$$

Sort and Find the Value

Sort and Find the Value

E

$$35 + 42$$

Sort and Find the Value

F

$$56 - 24$$

Sort and Find the Value

G

$$83 - 58$$

Sort and Find the Value

H

$$27 + 33$$

Sort and Find the Value

I

$$72 - 19$$

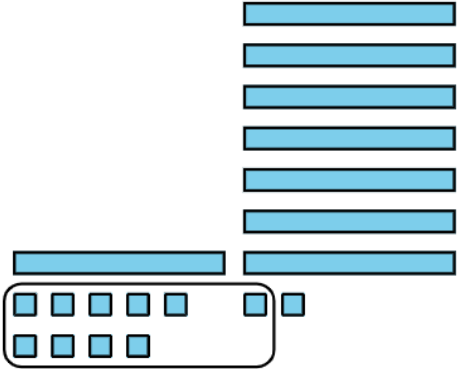
Sort and Find the Value

J



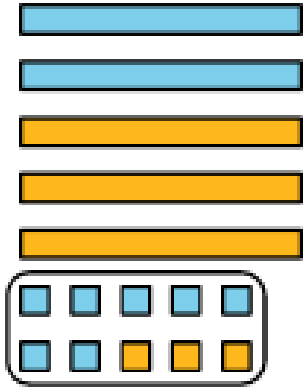
Sort and Find the Value

K



Sort and Find the Value

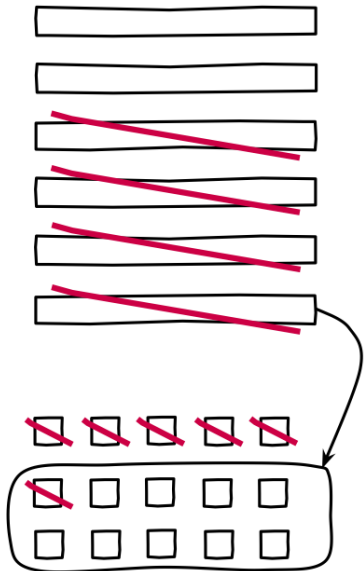
L



Sort and Find the Value

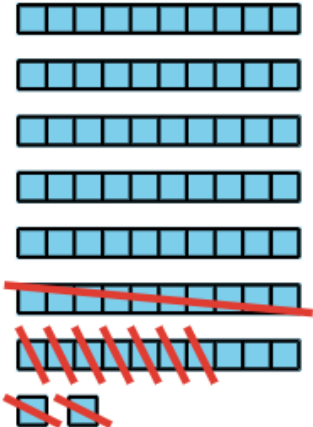
Sort and Find the Value

M



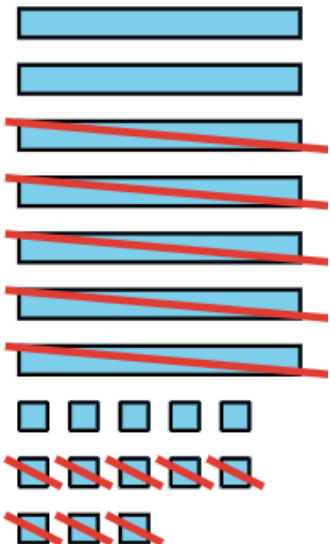
Sort and Find the Value

N



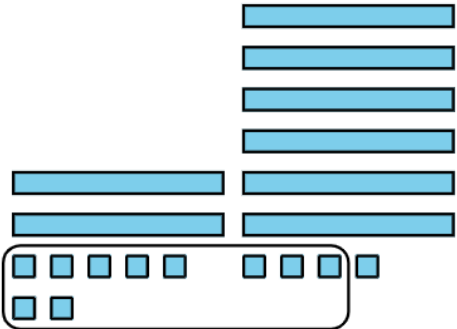
Sort and Find the Value

O



Sort and Find the Value

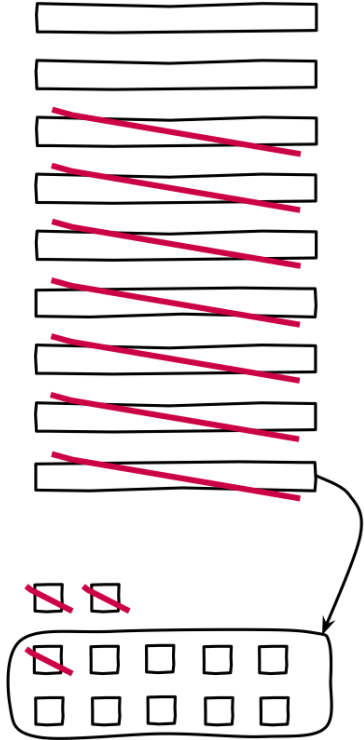
P



Sort and Find the Value

Sort and Find the Value

Q



Sort and Find the Value

R

