



¿Cuántas faltan?

Llenemos tableros de 10 de diferentes maneras.

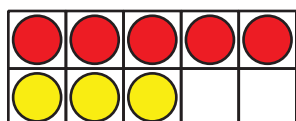


Calentamiento

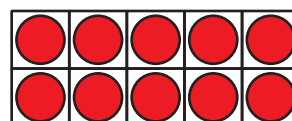
Cuáles tres van juntos: Tableros de 10

¿Cuáles 3 van juntos?

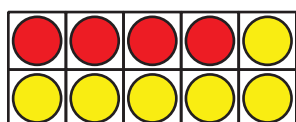
A



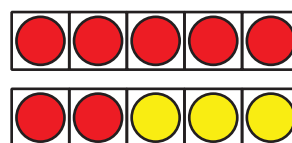
B



C



D



Actividad 1

Revuelve, saca y organiza con 10

$$10 = 5 + 5$$

$$10 = 9 + 1$$

$$10 = 4 + 6$$

$$10 = 2 + 8$$

$$10 = 6 + 4$$

$$10 = 3 + 7$$

$$10 = 1 + 9$$

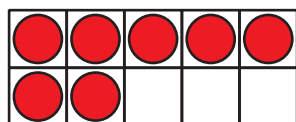
$$10 = 8 + 2$$

$$10 = 7 + 3$$

Actividad 2

¿Cuántas faltan para llenar el tablero de 10?

1.

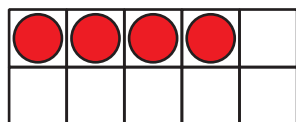


$$10 = 7 + 3$$

$$10 = 8 + 2$$

$$10 = 5 + 5$$

2.

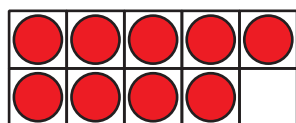


$$10 = 8 + 2$$

$$10 = 1 + 9$$

$$10 = 4 + 6$$

3.

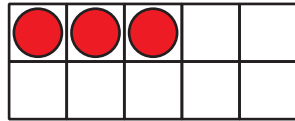


$$10 = 9 + 1$$

$$10 = 5 + 5$$

$$10 = 7 + 3$$

4.

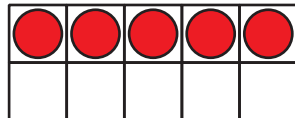


$$10 = 5 + 5$$

$$10 = 3 + 7$$

$$10 = 2 + 8$$

5.

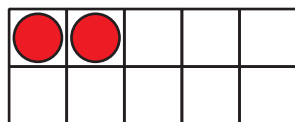


$$10 = 9 + 1$$

$$10 = 6 + 4$$

$$10 = 5 + 5$$

6.



$$10 = 1 + 9$$

$$10 = 2 + 8$$


$$10 = 4 + 6$$

Actividad 3

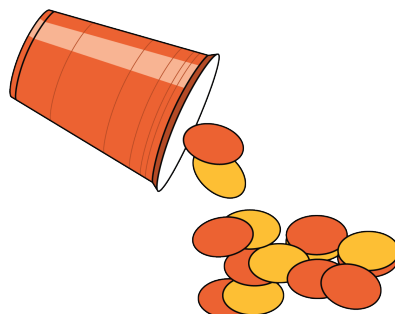
Centros: Momento de escoger

Escoge un centro.

Contar colecciones



Revuelve y saca



Lanza y suma

