



# Volume of Prism Drawings

Let's use layers to find volume.

## Warm-up

### Number Talk: Multiplication

Find the value of each expression mentally.

- $6 \times 4$

- $3 \times 2 \times 4$

- $3 \times 2 \times 5$

- $3 \times 2 \times 6$




## Activity 1

### Build Rectangular Prisms

The prisms on the cards are completely packed with unit cubes.

1. Pick a card.
2. Build the rectangular prism.
3. Find the volume. Explain how you found the volume to your partner.
4. Repeat.




## Activity 2


### Layers, Layers, and More Layers

The prisms are completely packed with unit cubes. Determine the volume of each prism. Explain or show your reasoning.

1.



2.



3.

