

Card Sort: At the Beach

**A**

Lin finds 28 more shells than  
Diego.  
Diego finds 32 shells.  
How many shells does she find?

Card Sort: At the Beach

**B**

Lin counts 28 boats.  
Diego counts 32 boats.  
How many more boats does he  
count?

Card Sort: At the Beach

**C**

Lin sees 32 starfish.  
Diego sees 28 fewer starfish than  
Lin.  
How many starfish does he see?

Card Sort: At the Beach

**D**

Lin finds 40 fewer crabs than  
Diego.  
Diego finds 57 crabs.  
How many crabs does she find?

Card Sort: At the Beach

**E**

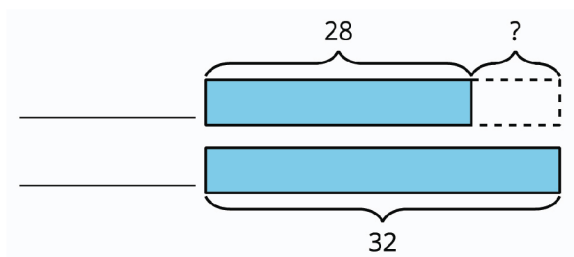
Lin counts 57 beach chairs.  
She counts 40 more people than  
chairs.  
How many people does she  
count?

Card Sort: At the Beach

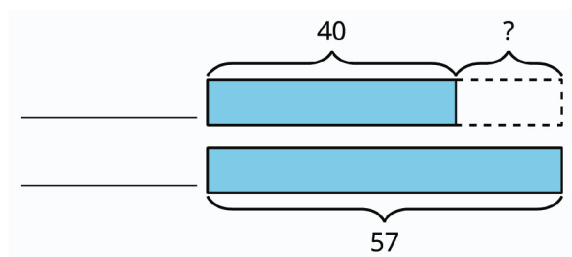
**F**

Diego sees 40 seagulls.  
Lin sees 57 seagulls.  
How many fewer seagulls does  
Diego see?

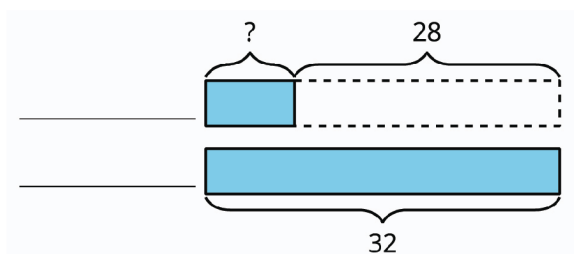
Card Sort: At the Beach

**G**

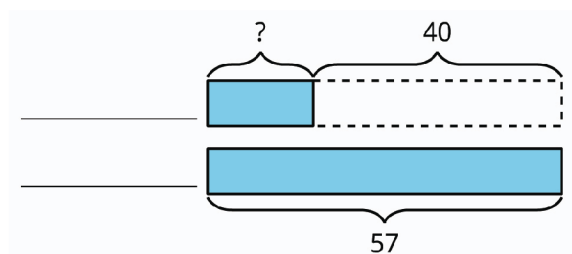
Card Sort: At the Beach

**H**

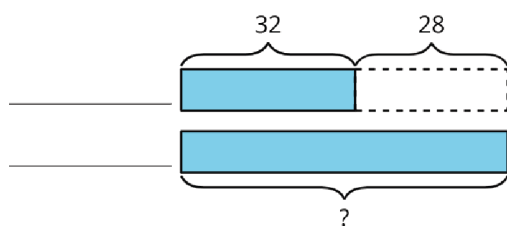
Card Sort: At the Beach

**I**

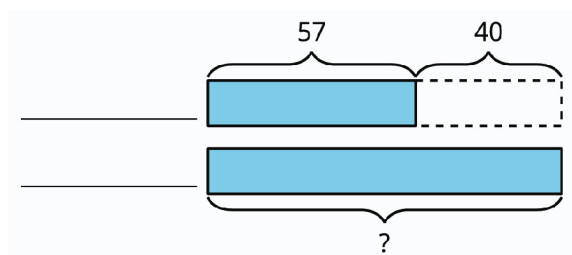
Card Sort: At the Beach

**J**

Card Sort: At the Beach

**K**

Card Sort: At the Beach

**L**

Card Sort: At the Beach

M

$$32 - 28 = ?$$

Card Sort: At the Beach

N

$$57 - 40 = ?$$

Card Sort: At the Beach

O

$$28 + ? = 32$$

Card Sort: At the Beach

P

$$40 + ? = 57$$

Card Sort: At the Beach

Q

$$32 + 28 = ?$$

Card Sort: At the Beach

R

$$57 + 40 = ?$$