



Time to the Nearest Minute

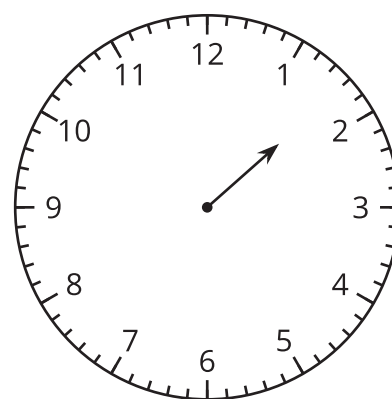
Let's tell and write time to the nearest minute.

Warm-up

Estimation Exploration: On the One Hand...

This clock only has an hour hand.

What time could it be?



Record an estimate that is:

too early	about right	too late

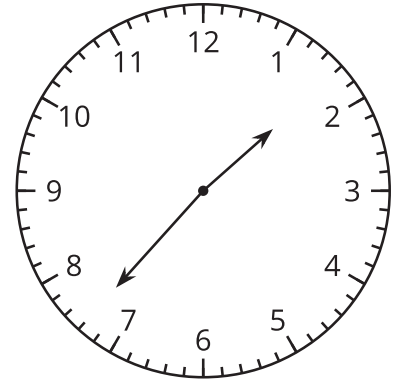
Activity 1

Just a Clock on the Wall

1. Lin says the time shown on the clock is 1:37 p.m.

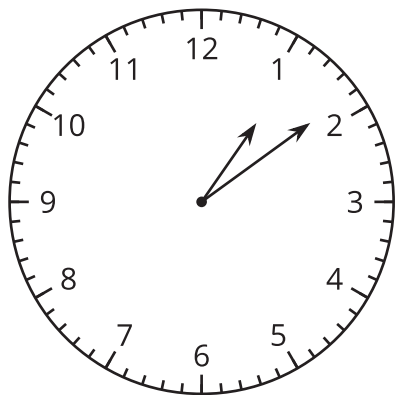
Diego says the time is 1:35 p.m.

Who do you agree with? Explain or show your reasoning.

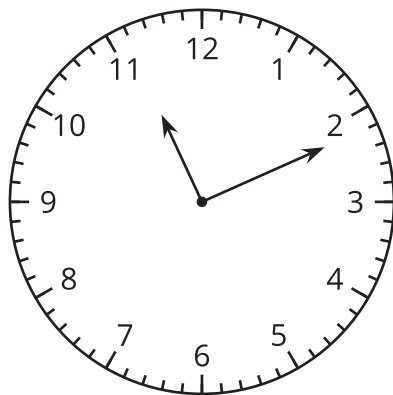


2. What time is shown on each clock?

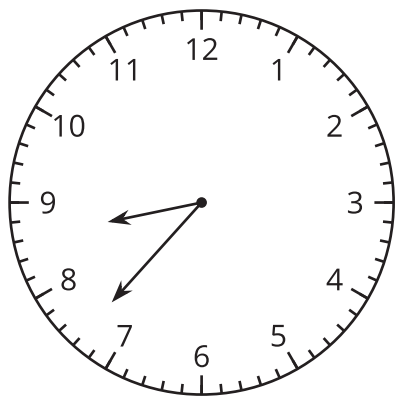
A



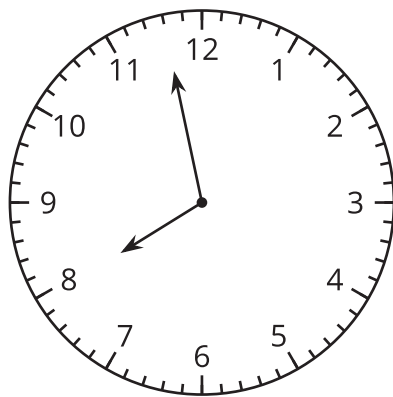
B



C



D

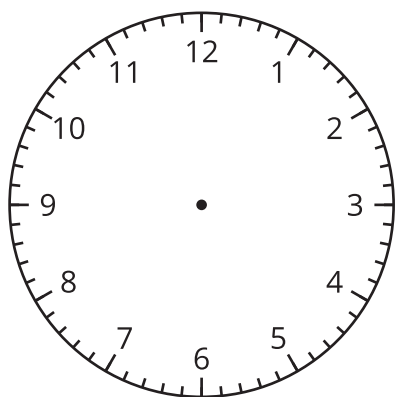


Activity 2

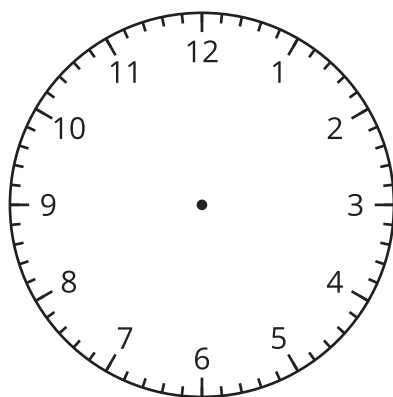
Show Time

1. Draw hands on each clock to show the given time.

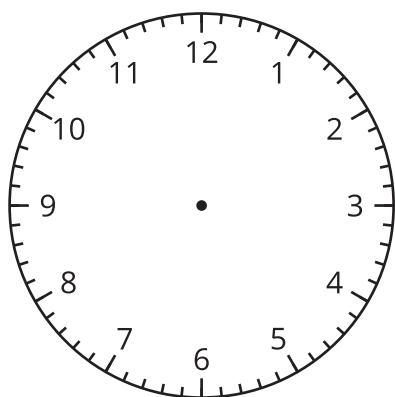
A 2:36 p.m.



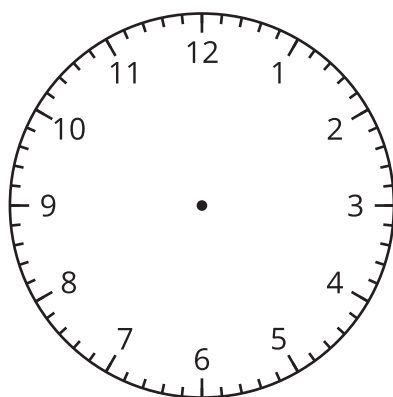
B 3:18 p.m.



C 12:17 p.m.



D 9:02 p.m.



2. Draw hands on this clock to show a time. Trade with a partner and tell the time shown on their clock.

