

Kindergarten Unit 6

Lesson 10

CC BY 2021 Illustrative Mathematics®

Unit 6 Lesson 10: Complete Equations


WU What do you know about 15? (Warm up)

Student Task Statement


What do you know about 15?

1 What Is Missing?


Student Task Statement



$$10 + 8 = \underline{\hspace{2cm}}$$






$$10 + 3 = \underline{\hspace{2cm}}$$



$$10 + 4 = \underline{\hspace{2cm}}$$



$$\underline{\hspace{2cm}} + \underline{\hspace{2cm}} = 16$$



$$\underline{\hspace{1cm}} + \underline{\hspace{1cm}} = 19$$

$$\underline{\hspace{1cm}} + \underline{\hspace{1cm}} = 12$$

2 Make the Equations True

Student Task Statement

1. $10 + 5 = \underline{\hspace{1cm}}$
2. $\underline{\hspace{1cm}} + \underline{\hspace{1cm}} = 16$
3. $\underline{\hspace{1cm}} + \underline{\hspace{1cm}} = 19$
4. $\underline{\hspace{1cm}} + \underline{\hspace{1cm}} = 13$
5. $\underline{\hspace{1cm}} + \underline{\hspace{1cm}} = 17$
6. $10 + 1 = \underline{\hspace{1cm}}$

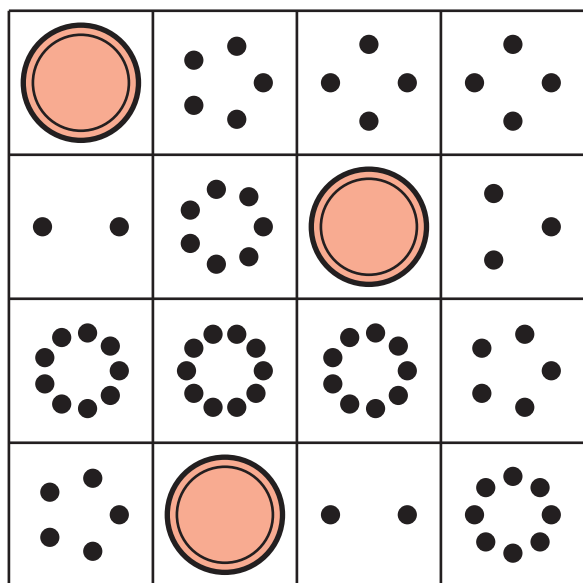


3 Centers: Choice Time

Student Task Statement

Choose a center.

Bingo




Grab and Count

Number Race



Tower Build



Make or Break Apart Numbers

