



Addition and Subtraction Expressions within 5

Let's add and subtract.

Warm-up

Which Three Go Together: Expressions and Equations

Which 3 go together?

A

$$3 + 1$$

B

$$3 = 2 + 1$$

C

$$3 + 0$$

D

$$4 - 1$$

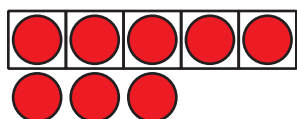


Activity 3

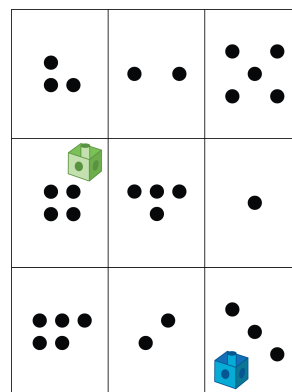
Centers: Choice Time

Choose a center.

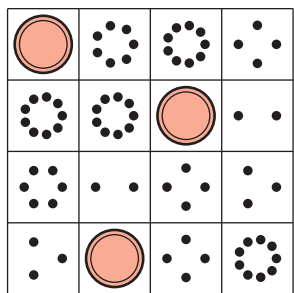
5-Frames




Roll and Add



Bingo



Geoblocks



Find the Value of Expressions

$$3 + 5 \quad 7 - 5$$

