



Parts to Make 5

Let's find the missing number.

Warm-up

How Many Do You See: Add and Subtract

How many do you see?

How do you see them?



Activity 1

Revisit Shake and Spill—Cover (up to 10)

Put 3, 4, or 5 counters in the cup.

Shake and spill the counters.

Hide some under the cup.

How many are hidden?

Write an expression.



Activity 2

Unknown Value

Fill in the missing number.

$$3 - \underline{\quad} = 2$$

$$5 - \underline{\quad} = 4$$

$$2 + \underline{\quad} = 2$$

$$3 + \underline{\quad} = 4$$

$$5 - \underline{\quad} = 2$$

$$4 - \underline{\quad} = 4$$

$$1 + \underline{\quad} = 2$$

$$2 + \underline{\quad} = 4$$



$$5 - \underline{\hspace{2cm}} = 3$$

$$1 + \underline{\hspace{2cm}} = 5$$

$$2 + \underline{\hspace{2cm}} = 3$$

$$4 + \underline{\hspace{2cm}} = 5$$

$$4 - \underline{\hspace{2cm}} = 3$$

$$5 - \underline{\hspace{2cm}} = 5$$

$$0 + \underline{\hspace{2cm}} = 3$$

$$3 + \underline{\hspace{2cm}} = 5$$

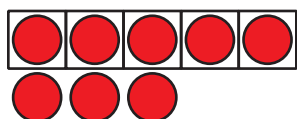


Activity 3

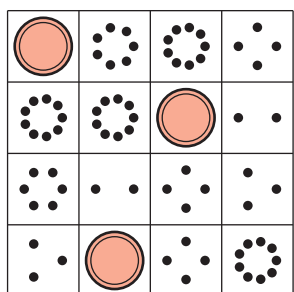
Centers: Choice Time

Choose a center.

5-Frames



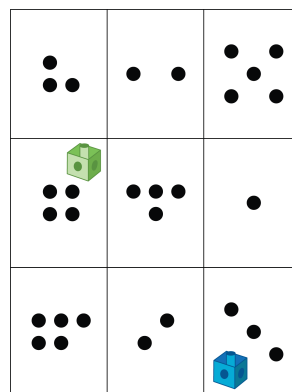
Bingo



Find the Value of Expressions

$$3 + 5 \quad 7 - 5$$

Roll and Add



Geoblocks

