



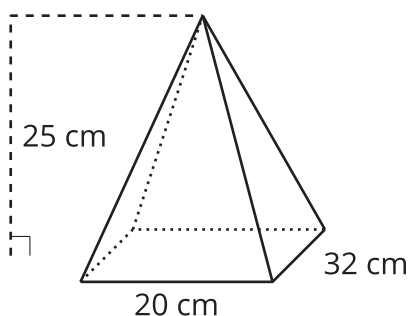
# Building a Volume Formula for a Pyramid

Let's create a formula for the volume of any pyramid or cone.

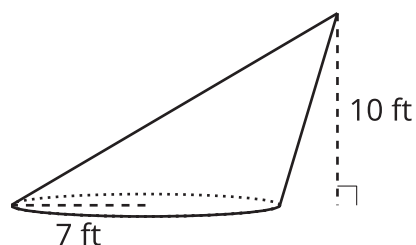
## 15.1 Cover Your Bases

Two solids are shown.

**A**



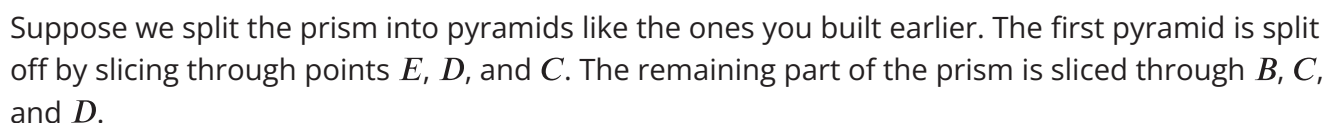
**B**



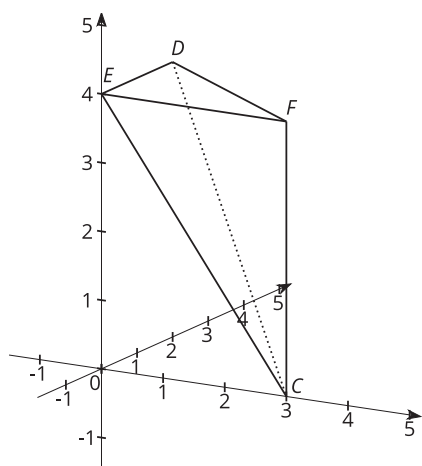
For each solid, draw and label a prism or cylinder that has a base congruent to the solid's and a height equal to the solid's.

## 15.2 Splitting a Prism into Pyramids

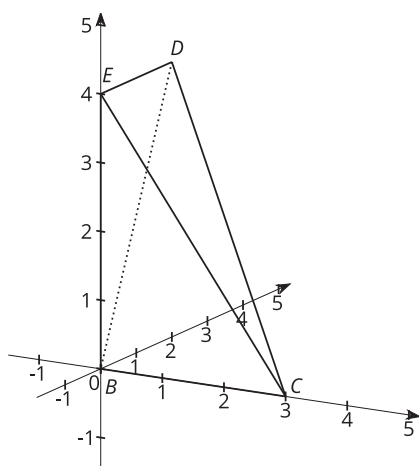
Here is a triangular prism.



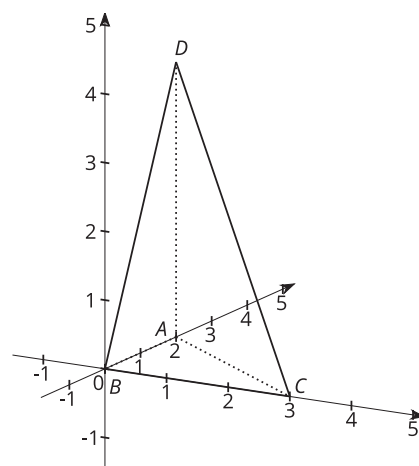
**P1**



**P2**



**P3**



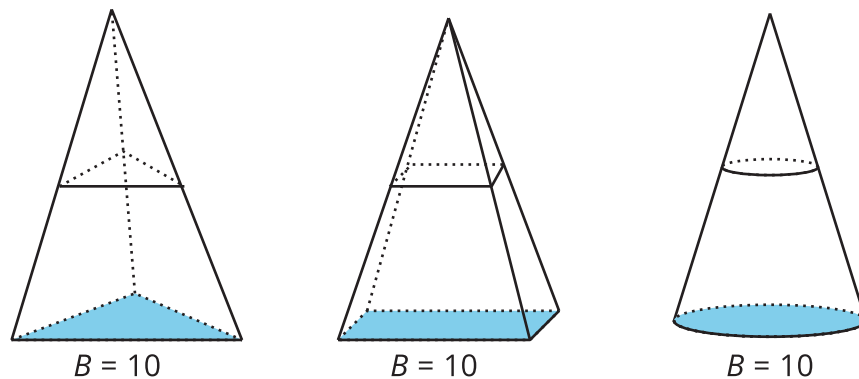
1. Using the pyramids you built, compare pyramids P1 and P3.
  - a. Think of the faces marked P1 and P3 as the bases of the pyramids. These triangles are the two bases of the original prism. How do the areas of these two bases compare?
  - b. How do the heights of pyramids P1 and P3 compare? Explain your reasoning.
  - c. How do the volumes of pyramids P1 and P3 compare? Explain your reasoning.
2. Using the pyramids you built, compare pyramids P2 and P3.
  - a. Think of the gray shaded triangles as the bases of the pyramids. These are formed by slicing one of the prism's rectangular faces down its diagonal. How do the areas of these two bases compare?
  - b. The heights of pyramids P2 and P3 are equal because when assembled into the prism, the height lines coincide along the length of the prism. How, then, do the volumes of

these pyramids compare? Explain your reasoning.

3. Based on your answers, how does the volume of each pyramid compare to the volume of the prism?
4. How could you use this information to find the volume of one of the pyramids?

## 15.3 Comparing Cross-Sections

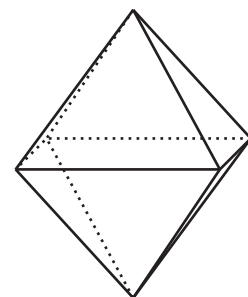
Each solid in the image has a height of 6 units. The area of each solid's base is 10 square units. A cross-section has been created in each by dilating the base using the apex as a center with a scale factor of  $k = 0.5$ .



1. Calculate the area of each of the 3 cross-sections.
2. Suppose a new cross-section was created in each solid, all at the same height, using some scale factor  $k$ . How would the areas of these 3 cross-sections compare? Explain your reasoning.
3. What does this information about cross-sections tell you about the volumes of the 3 solids?
4. Calculate the volume of each of the solids.

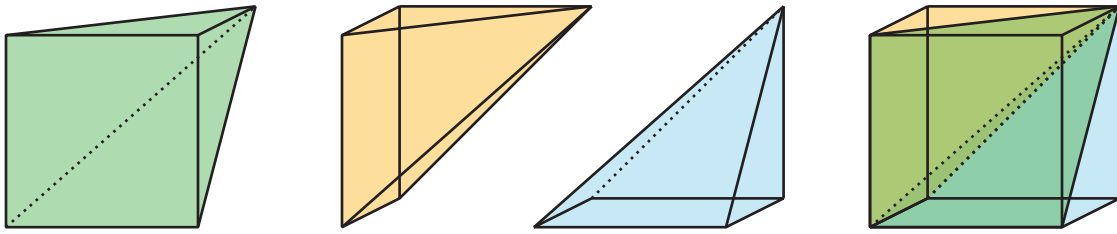
### Are you ready for more?

An octahedron is a solid whose faces consist of 8 equilateral triangles. Find the volume of an octahedron with edge length  $\ell$ .



## Lesson 15 Summary

We can use relationships between pyramids and prisms to build a formula for the volume of a pyramid. The image shows three square pyramids assembled into a cube. All three pyramids have the same volume so their volume must be one-third the volume of the cube.



More generally, a triangular pyramid has one-third the volume of the prism that has the same height and a base congruent to the pyramid's.

Suppose we have a pyramid that doesn't have a triangular base. Call the area of its base  $B$  and its height  $h$ . To understand how to find the volume of such a solid, think about a triangular pyramid that also has an area of  $B$  square units and a height of  $h$ .

Now find a cross-section of each solid by dilating the solid's base using the apex as a center with some scale factor  $k$  between 0 and 1. The area of the cross-section in both solids will be  $Bk^2$ . This is true for any value of  $k$ . Because the cross-sections at all heights have equal area, the solids have the same volume. The same idea would apply to a cone. This means that the expression  $\frac{1}{3}Bh$  gives the volume of *any* pyramid or cone.

