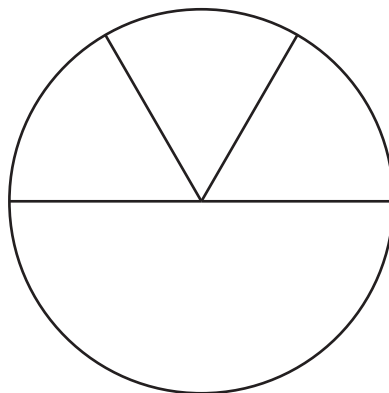


Section B: Practice Problems


1. a. Han drew this picture to show a circle split into fourths.



Do you agree with Han?


Show your thinking using drawings, numbers, or words.

- b. Split the rectangle into fourths.



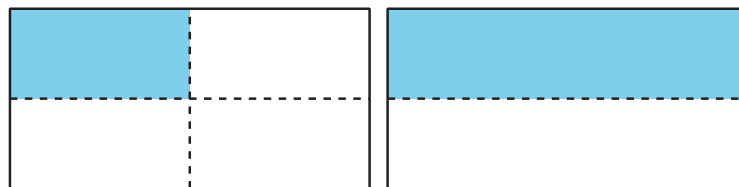
(From Unit 7, Lesson 9.)

2. a. Split the circle into fourths.
b. Color in four of the fourths.



(From Unit 7, Lesson 10.)

3. a. How much of each rectangle is shaded?



- b. Circle the rectangle that has a bigger shaded piece.

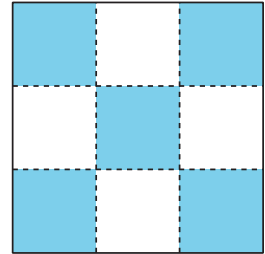
(From Unit 7, Lesson 10.)

4. Exploration

a. Kiran says half of the square is shaded.

Do you agree with Kiran?

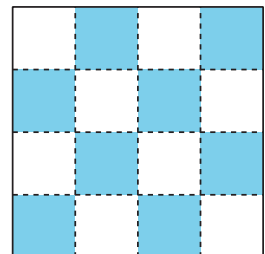
Show your thinking using
drawings, numbers, or words.



b. Priya says half of the square is shaded.

Do you agree with Priya?

Show your thinking using
drawings, numbers, or words.



5. Exploration

Han wonders if half of the circle is shaded.
What do you think?

