



# Make Dot Images

Let's make groups of dots.






## Warm-up

# How Many Do You See: Dots in Different Colors

How many do you see?

How do you see them?



## Activity 3

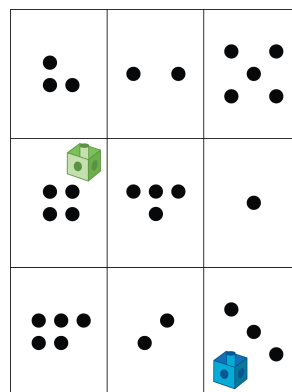
### Centers: Choice Time

Choose a center.

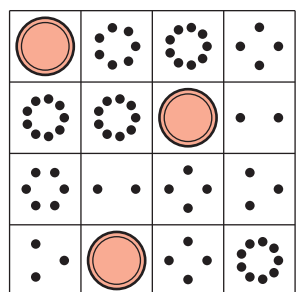
5-Frames




Roll and Add



Bingo



Geoblocks



Find the Value of Expressions

$$3 + 5 \quad 7 - 5$$