



# Addition and Subtraction Expressions within 5

Let's add and subtract.

Warm-up

## Which Three Go Together: Expressions and Equations

Which 3 go together?

**A**

$$3 + 1$$

**B**

$$3 = 2 + 1$$

**C**

$$3 + 0$$

**D**

$$4 - 1$$

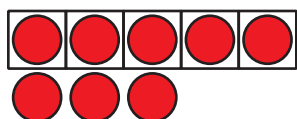


## Activity 3

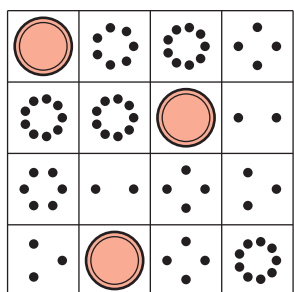
### Centers: Choice Time

Choose a center.

5-Frames



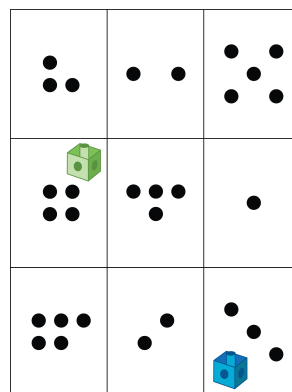
Bingo



Find the Value of  
Expressions

$$3 + 5 \quad 7 - 5$$

Roll and Add



Geoblocks

