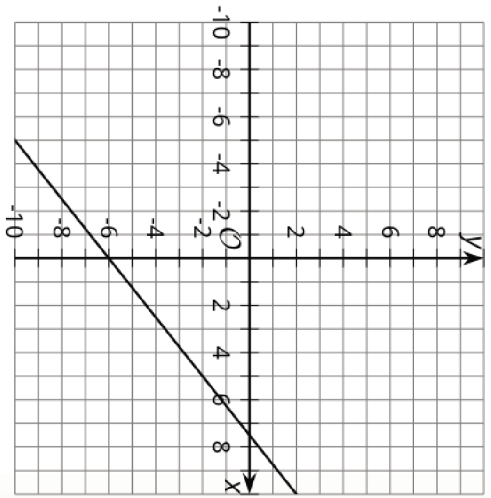
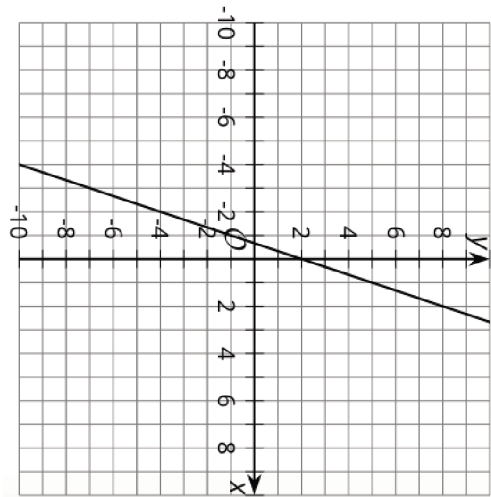


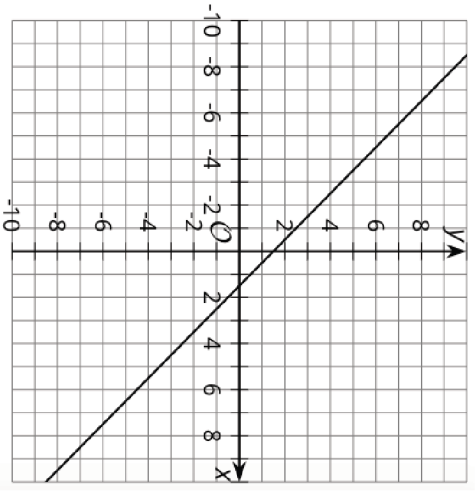
Matching, Matching
Graph A



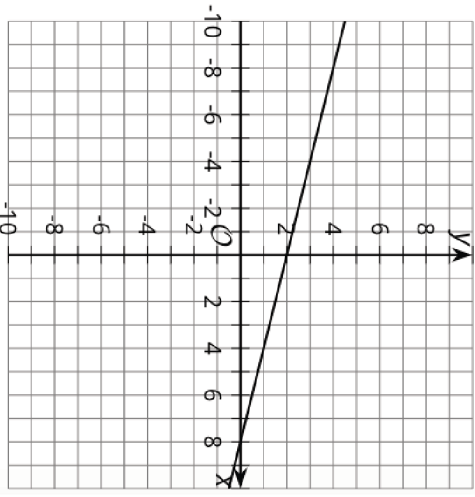
Matching, Matching
Graph B



Matching, Matching
Graph C



Matching, Matching
Graph D



Matching, Matching
Equation 1

$$1.5 = x + y$$

Matching, Matching
Equation 2

$$y = \frac{4}{5}x - 6$$

Matching, Matching
Equation 3

$$y = 3x + 2$$

Matching, Matching
Equation 4

$$2x + 8y = 16$$

Matching, Matching
Equation 5

$$5y - 4x = -30$$

Matching, Matching
Equation 6

$$8 = x + 4y$$