



# Time to the Nearest Minute

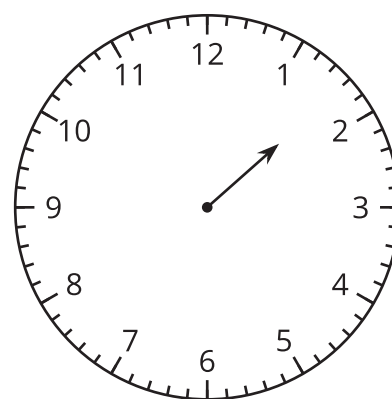
Let's tell and write time to the nearest minute.

## Warm-up

### Estimation Exploration: On the One Hand...

This clock only has an hour hand.

What time could it be?



Record an estimate that is:

too early	about right	too late

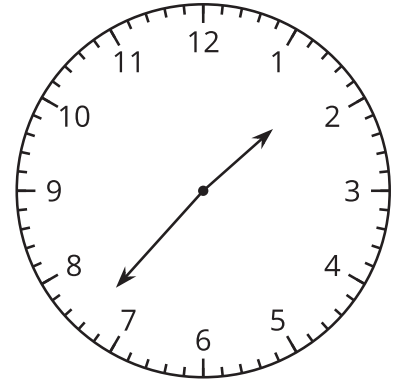
## Activity 1

### Just a Clock on the Wall

1. Lin says the time shown on the clock is 1:37 p.m.

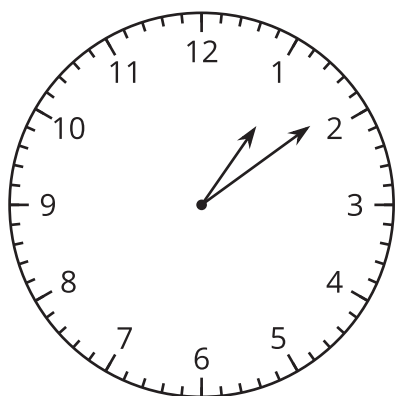
Diego says the time is 1:35 p.m.

Who do you agree with? Explain or show your reasoning.

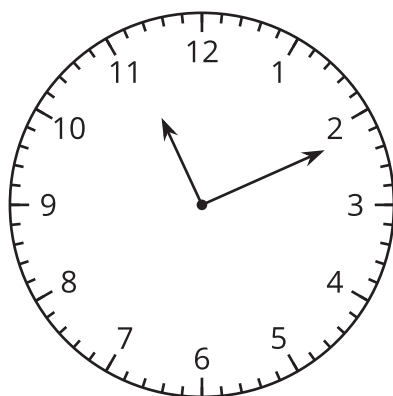


2. What time is shown on each clock?

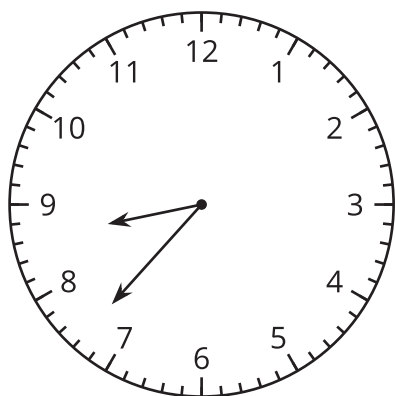
**A**



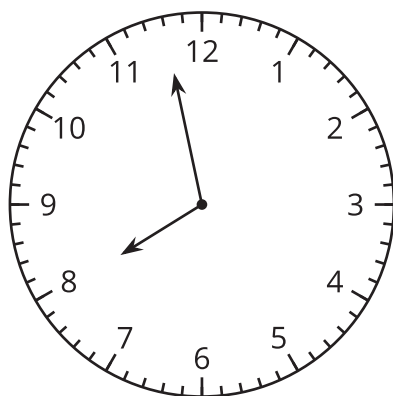
**B**



**C**



**D**

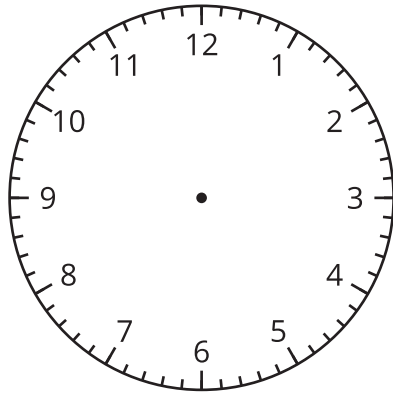


## Activity 2

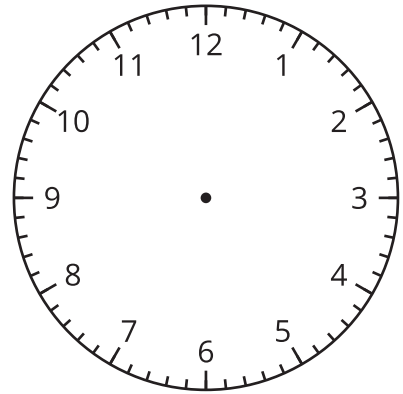
### Show Time

1. Draw hands on each clock to show the given time.

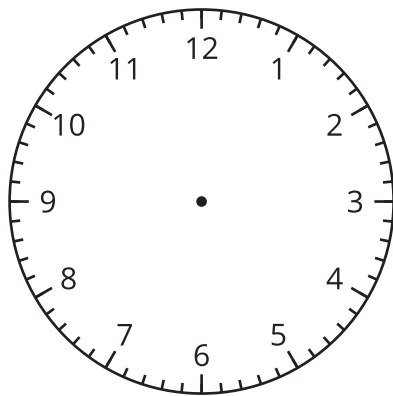
**A 2:36 p.m.**



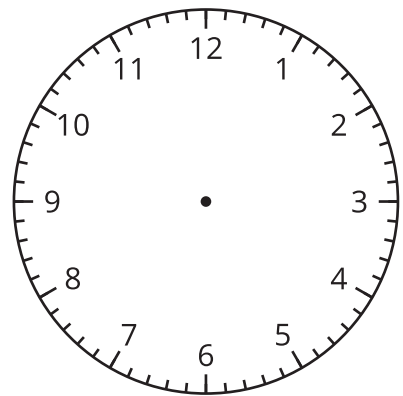
**B 3:18 p.m.**



**C 12:17 p.m.**



**D 9:02 p.m.**



2. Draw hands on this clock to show a time. Trade with a partner and tell the time shown on their clock.

