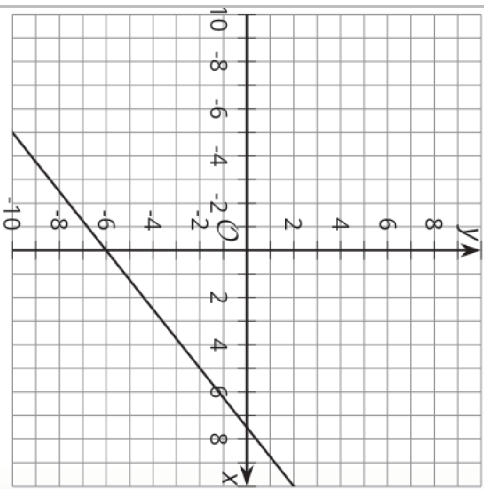
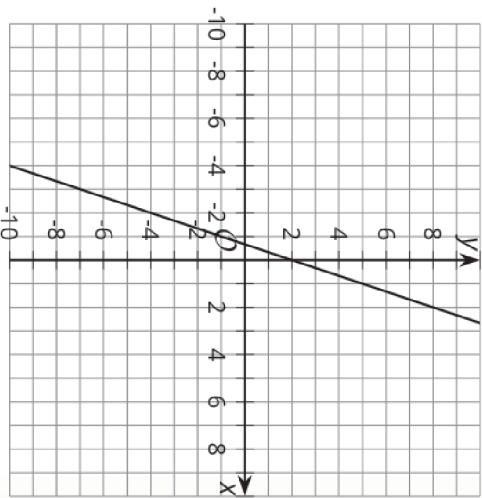


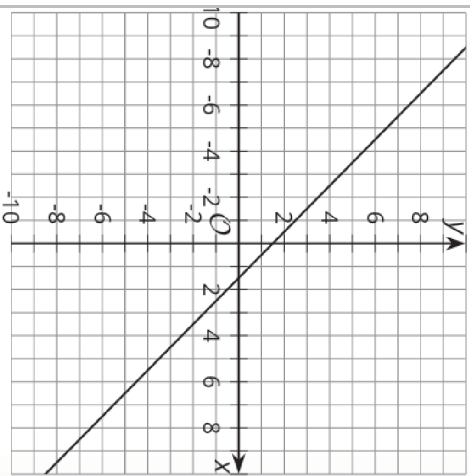
Matching, Matching, Spanish  
 Gráfica A



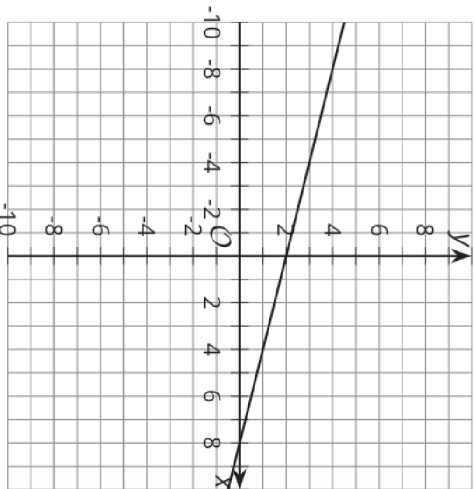
Matching, Matching, Spanish  
 Gráfica B



Matching, Matching, Spanish  
 Gráfica C



Matching, Matching, Spanish  
 Gráfica D



Matching, Matching, Spanish <b>Ecuación 1</b>  $5 = x + y$	
Matching, Matching, Spanish <b>Ecuación 2</b>  $y = \frac{4}{5}x - 6$	Matching, Matching, Spanish <b>Ecuación 3</b>  $= 3x + 2$
Matching, Matching, Spanish <b>Ecuación 4</b>  $2x + 8y = 16$	Matching, Matching, Spanish <b>Ecuación 5</b>  $y - 4x = -30$
Matching, Matching, Spanish <b>Ecuación 6</b>  $8 = x + 4y$	