



Make 10

Let's make 10.

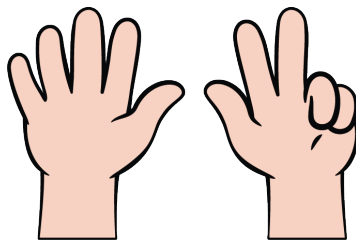




Warm-up

How Many Do You See: Fingers Up and Down

How many do you see?

How do you see them?



Activity 2

Make 10

3 _____

$10 = \underline{\quad} + \underline{\quad}$

9 _____

$10 = \underline{\quad} + \underline{\quad}$

2 _____

$10 = \underline{\quad} + \underline{\quad}$

5 _____

$10 = \underline{\quad} + \underline{\quad}$



7 _____

$$10 = \underline{\quad\quad} + \underline{\quad\quad}$$

6 _____

$$10 = \underline{\quad\quad} + \underline{\quad\quad}$$

8 _____

$$10 = \underline{\quad\quad} + \underline{\quad\quad}$$

4 _____

$$10 = \underline{\quad\quad} + \underline{\quad\quad}$$




Activity 3

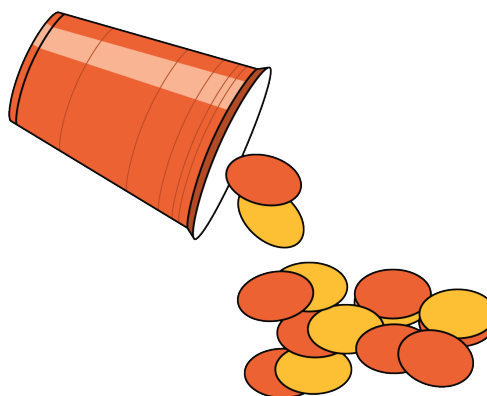
Centers: Choice Time

Choose a center.


Math Fingers



Shake and Spill



Counting Collections



Roll and Add

