

Card Sort: Represent Story Problems

A

There are 53 baseballs in a box. There are 25 fewer tennis balls than baseballs in the box. How many tennis balls are in the box?

Card Sort: Represent Story Problems

B

Jada collected some pine cones in the park. Han took 25 of Jada's pine cones. There are 53 pine cones left. How many pine cones did Jada collect?

Card Sort: Represent Story Problems

C

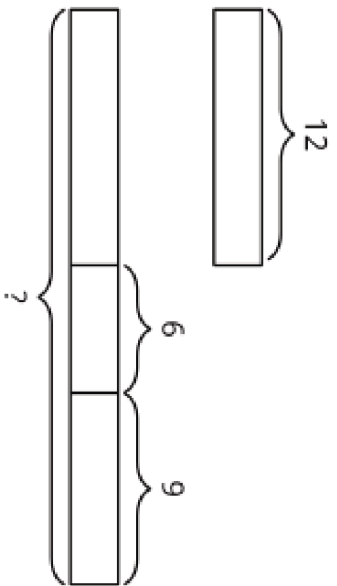
There are 12 pattern blocks in a bag. There are 6 more pattern blocks on the table than in the bag. Jada puts 9 more pattern blocks on the table. How many pattern blocks are on the table now?

Card Sort: Represent Story Problems

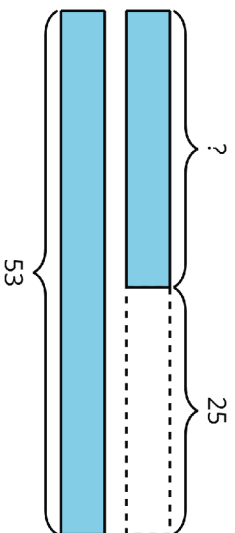
D

There are 12 puzzle pieces in the box. Diego puts 6 more puzzle pieces in the box. There are now 9 more puzzle pieces in the box than on the table. How many puzzle pieces are on the table?

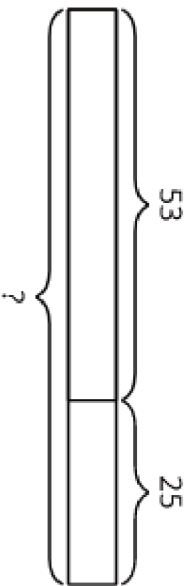
Card Sort: Represent Story Problems  
E



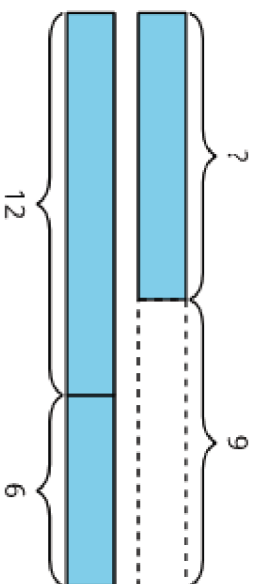
Card Sort: Represent Story Problems  
F



Card Sort: Represent Story Problems  
G



Card Sort: Represent Story Problems  
H



Card Sort: Represent Story Problems  
I

$$? - 25 = 53$$

Card Sort: Represent Story Problems  
J

$$12 + 6 + 9 = ?$$

Card Sort: Represent Story Problems  
K

$$? + 25 = 53$$

Card Sort: Represent Story Problems  
L

$$12 + 6 - 9 = ?$$