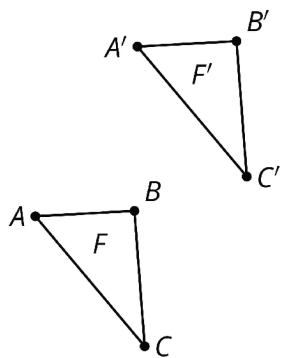


Name That Image

Card A



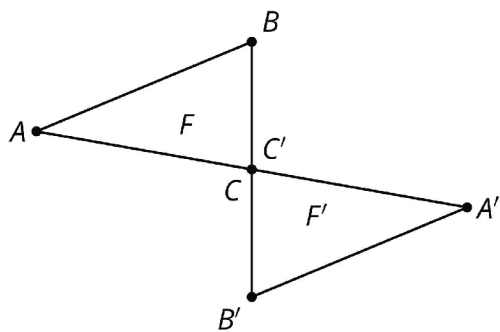
Name That Image

Card 1

Figure F has been rotated 180° around one of its vertices.

Name That Image

Card B



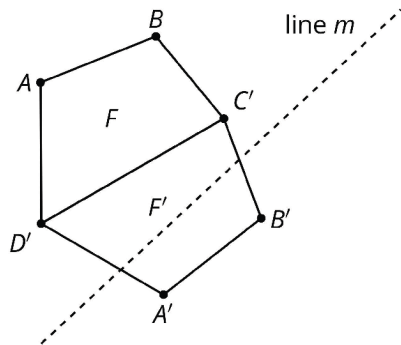
Name That Image

Card 2

Figure F has been rotated 180° around a point.

Name That Image

Card C



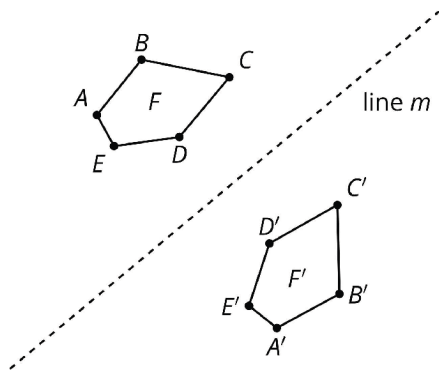
Name That Image

Card 3

Figure F is reflected over line m .

Name That Image

Card D



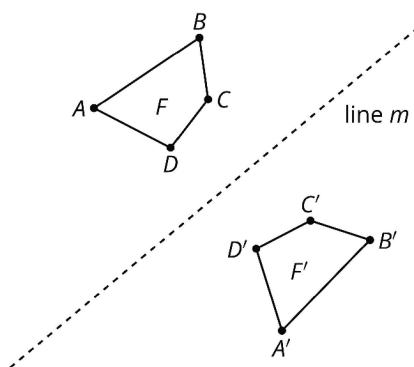
Name That Image

Card 4

Figure F is translated by a directed segment with negative slope.

Name That Image

Card E



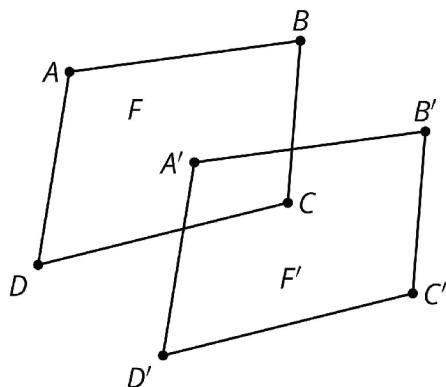
Name That Image

Card 5

Figure F is reflected over side CD .

Name That Image

Card F



Name That Image

Card 6

Figure F is translated by a directed line segment that has a positive slope.