

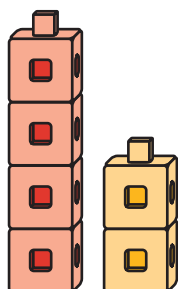
# Lesson 1: Count 2 Groups of Objects

- Let's find out how many objects there are in two groups.


## Warm-up: Which One Doesn't Belong: Groups

Which one doesn't belong?

**A**



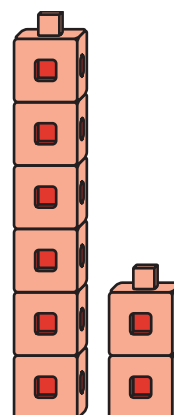
**B**



**C**



**D**





# 1.1: Put Together Pattern Blocks

How many pattern blocks do you have?

I have \_\_\_\_\_ pattern blocks.



## 1.2: Put Together Connecting Cubes

How many cubes do you and your partner have together?

\_\_\_\_\_

-----

We have \_\_\_\_\_ cubes.

\_\_\_\_\_

-----


We have \_\_\_\_\_ cubes.



# 1.3: Centers: Choice Time

Choose a center.

Math Libs



Match Mine

