

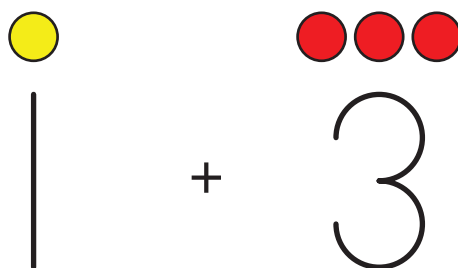
# Lesson 15: Expressions and Drawings

- Let's match expressions to drawings.

## Warm-up: Notice and Wonder: Shapes and Numbers

What do you notice?

What do you wonder?





# 15.1: Match Drawings to Expressions



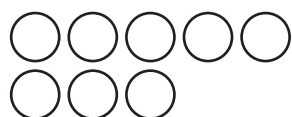
$$9 - 2$$



$$6 - 3$$



$$4 + 2$$



$$6 + 3$$



$$5 + 3$$



$$7 + 0$$



## 15.2: Create Expressions and Drawings

Fill in the missing expressions and drawings.

$4 + 3$



$4 - 0$



$\underline{\quad\quad} - \underline{\quad\quad}$



$5 + 3$





Fill in the missing expressions and drawings.

$8 - 2$

---

$\underline{\hspace{1cm}} + \underline{\hspace{1cm}}$



$1 + 6$

---

$\underline{\hspace{1cm}} - \underline{\hspace{1cm}}$



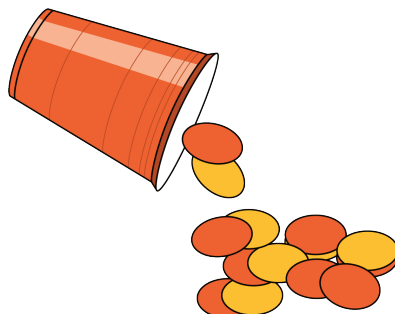




## 15.3: Introduce Shake and Spill, Represent

Choose a center.

Shake and Spill



Number Race



Math Stories

