



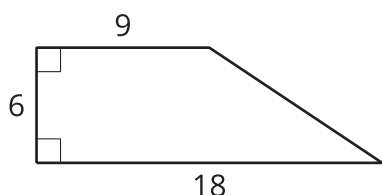
# Accessing Areas and Pondering Perimeters

Let's think about rectangles.

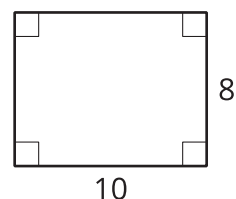
## 1.1 Which Three Go Together: Quadrilaterals

Which three go together? Why do they go together?

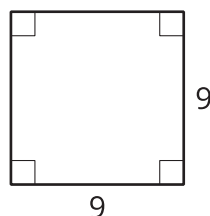
**A**



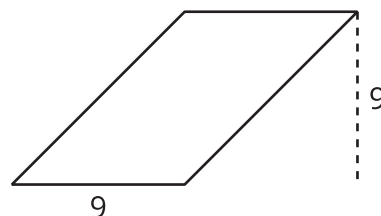
**B**



**C**

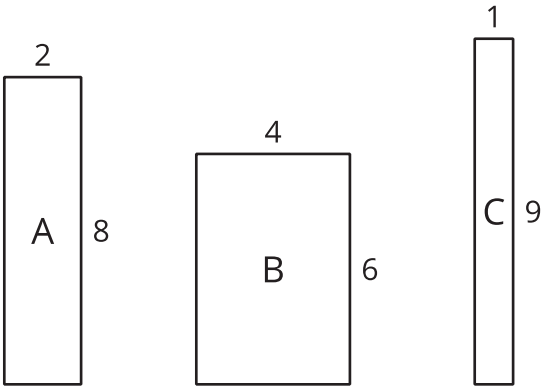


**D**



# 1.2 Inspect Some Rectangles

Here are some rectangles.



- Which rectangle has the greatest perimeter?
  - Which rectangle has the greatest area?
  - What is a rectangle with the same perimeter, but an even greater area than the last answer?
4. For the remaining questions, tables are given to organize your work. Rectangle D has a perimeter of 32 units.
- Find the side lengths of three different possible rectangles that have this perimeter.
  - Find a pair of side lengths for Rectangle D that give the greatest area in square units.
  - Find a pair of side lengths for Rectangle D that give the smallest area in square units.

length (units)	width (units)	perimeter (units)	area (square units)

5. Rectangle E has an area of 36 square units.
- Find 3 pairs of side lengths that give this area.
  - Find a pair of side lengths for Rectangle E that give the greatest perimeter in whole-number units.
  - Find a pair of side lengths for Rectangle E that give the smallest perimeter in whole-number units.

length (units)	width (units)	perimeter (units)	area (square units)

## 1.3

## Inspect Some Tables

Here are two tables. The first shows some measurements of Rectangle A, with a side length of 5 cm. The second shows some measurements of Rectangle B, which is a square.

1. Complete the table for Rectangle A, and be prepared to explain your reasoning.

length (cm)	width (cm)	perimeter (cm)	area (sq cm)
5	1		
5	2		
5	4		
5		20	
5			40
5		28	
5			50
5	$x$		

2. Complete the table for Rectangle B, and be prepared to explain your reasoning.

length (cm)	width (cm)	perimeter (cm)	area (sq cm)
1	1		
2	2		
3	3		
4		16	
	8		
			100
	$x$		

3. Sketch the graph of each pair of quantities, where the width is plotted along the  $x$ -axis.

- a.  $x$  and the perimeter of Rectangle A
- b.  $x$  and the area of Rectangle A
- c.  $x$  and the perimeter of Rectangle B
- d.  $x$  and the area of Rectangle B

