



# Count 2 Groups of Images

Let's count things in 2 groups.



## Activity 1

### Put Together Dots on 5-Frames

There are \_\_\_\_\_ dots.

There are \_\_\_\_\_ dots.

There are \_\_\_\_\_ dots.

There are \_\_\_\_\_ dots.


There are \_\_\_\_\_ dots.



## Activity 2

### How Many Apples?

1.




---

---

There are \_\_\_\_\_ apples.

2.




---

---

There are \_\_\_\_\_ apples.

3.




---

---

There are \_\_\_\_\_ apples.

4.



---

---

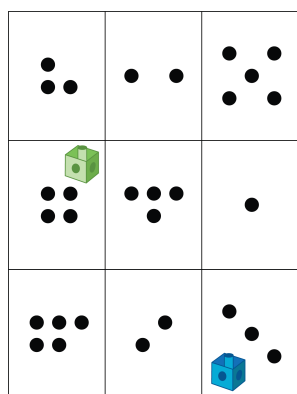
There are \_\_\_\_\_ apples.

## Activity 3

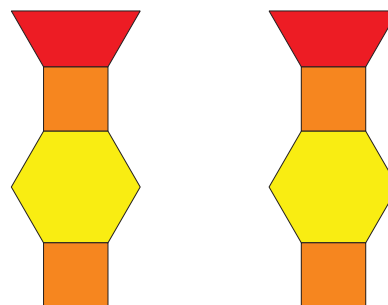
### Introduce Roll and Add—Dots

Choose a center.


Roll and Add



Match Mine



Math Libs



Tower Build

