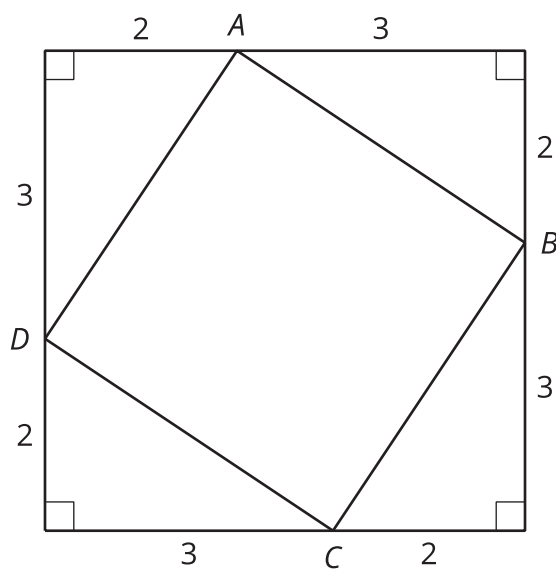


Square Roots and Cube Roots

Let's think about square and cube roots.

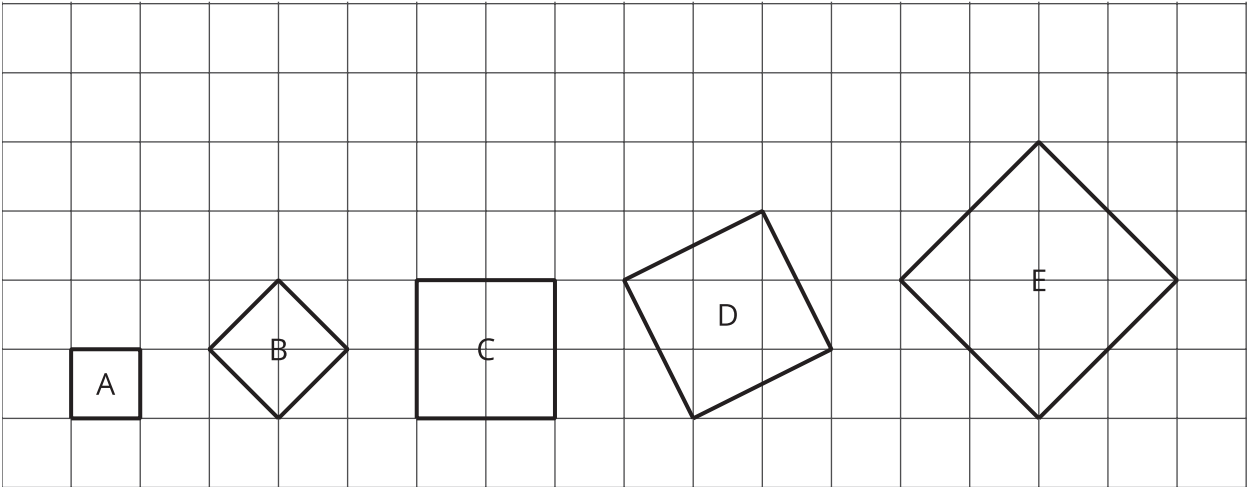
2.1 It's a Square

Find the area of square $ABCD$.



2.2

Squares and Their Side Lengths



1. Complete the table. Give the area of each square in square units, and give its exact side length in units.

figure	A	B	C	D	E
area	1				
side length	1				

2. This table includes areas in square units and side lengths in units of some more squares. Complete the table.


area	9		23		89
side length		4		6.4	

Are you ready for more?

In the first question, all of the squares have vertices at grid points.

1. Is there a square whose vertices are at grid points and whose area is 7 square units? Explain how you know.
2. Is there a square whose vertices are at grid points and whose area is 10 square units? Explain how you know.

2.3 Cube It

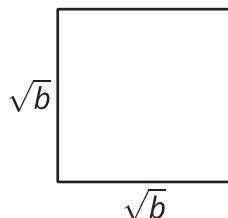


1. A cube has an edge length of 3 units. What is the volume of the cube?
2. A cube has an edge length of 4 units. What is the volume of the cube?
3. A cube has a volume of 8 units. What is the edge length of the cube?
4. A cube has a volume of 7 units. What is the edge length of the cube?
5. $\sqrt[3]{1,200}$ is between 10 and 11 because $10^3 = 1,000$ and $11^3 = 1,331$. Determine the whole numbers that each of these cube roots lies between:

$$\sqrt[3]{5} \quad \sqrt[3]{10} \quad \sqrt[3]{50} \quad \sqrt[3]{100} \quad \sqrt[3]{500}$$

Lesson 2 Summary

If a square has a side length of s , then the area is s^2 . If a square has an area of A , then the side length is \sqrt{A} . For a positive number b , the square root of b is defined as the positive number that squares to make b , and it is written as \sqrt{b} . In other words, $(\sqrt{b})^2 = b$. We can also think of \sqrt{b} as a solution to the equation $x^2 = b$. This square has an area of b because its sides have length \sqrt{b} :



Similarly, if a cube has an edge length of s , then the volume is s^3 . If a cube has a volume of V , then the edge length is $\sqrt[3]{V}$. The number $\sqrt[3]{a}$ is defined as the number that cubes to make a . In other words, $(\sqrt[3]{a})^3 = a$. We can also think of $\sqrt[3]{a}$ as a solution to the equation $x^3 = a$. This cube has a volume of a because its sides have a length of $\sqrt[3]{a}$:

