

Card Sort: At the Beach

A

Lin finds 28 more shells than
Diego.
Diego finds 32 shells.
How many shells does she find?

Card Sort: At the Beach

B

Lin counts 28 boats.
Diego counts 32 boats.
How many more boats does he
count?

Card Sort: At the Beach

C

Lin sees 32 starfish.
Diego sees 28 fewer starfish than
Lin.
How many starfish does he see?

Card Sort: At the Beach

D

Lin finds 40 fewer crabs than
Diego.
Diego finds 57 crabs.
How many crabs does she find?

Card Sort: At the Beach

E

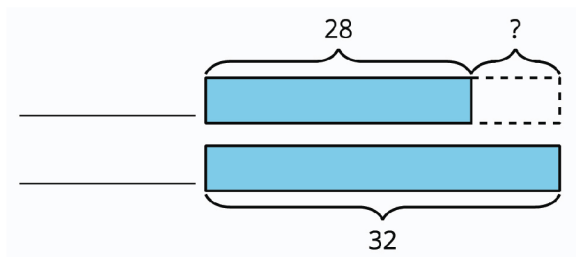
Lin counts 57 beach chairs.
She counts 40 more people than
chairs.
How many people does she
count?

Card Sort: At the Beach

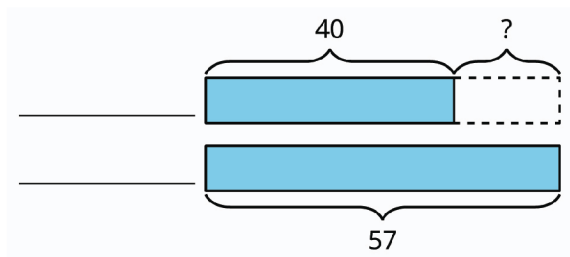
F

Diego sees 40 seagulls.
Lin sees 57 seagulls.
How many fewer seagulls does
Diego see?

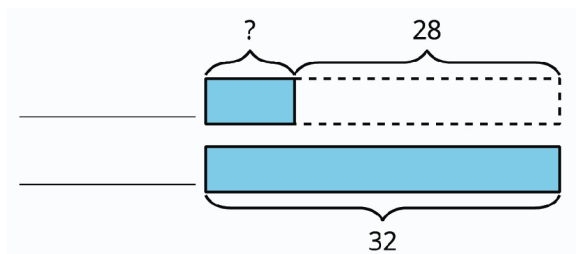
Card Sort: At the Beach

G

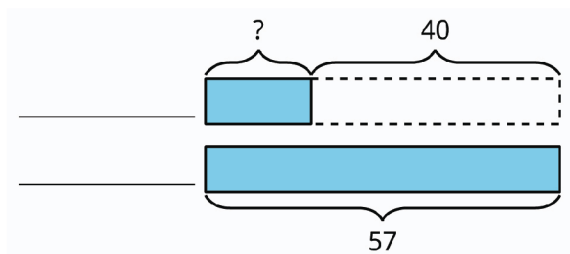
Card Sort: At the Beach

H

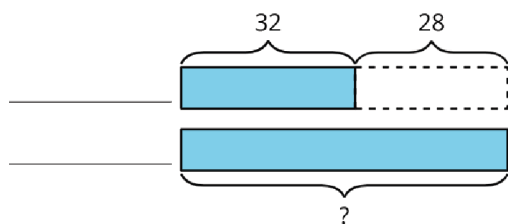
Card Sort: At the Beach

I

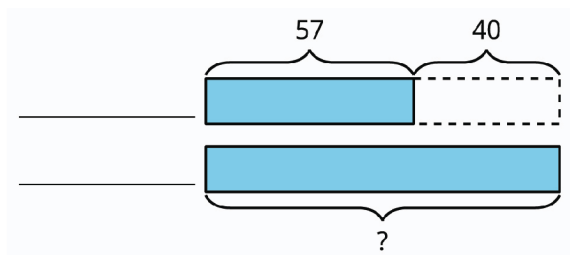
Card Sort: At the Beach

J

Card Sort: At the Beach

K

Card Sort: At the Beach

L

Card Sort: At the Beach

M

$$32 - 28 = ?$$

Card Sort: At the Beach

N

$$57 - 40 = ?$$

Card Sort: At the Beach

O

$$28 + ? = 32$$

Card Sort: At the Beach

P

$$40 + ? = 57$$

Card Sort: At the Beach

Q

$$32 + 28 = ?$$

Card Sort: At the Beach

R

$$57 + 40 = ?$$