



# Half of the Clock

Let's learn more about time to the half hour.

Warm-up

## Number Talk: Work with 30

Find the value of each expression mentally.

- $30 + 10$

- $30 + 15$

- $30 + 30$

- $30 + 35$

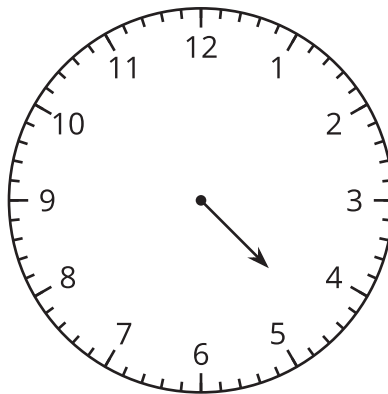
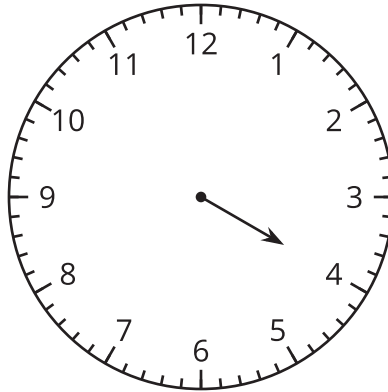


## Activity 1

### Put Times in Order

What do you notice?

What do you wonder?



## Activity 2

### Half Past What?

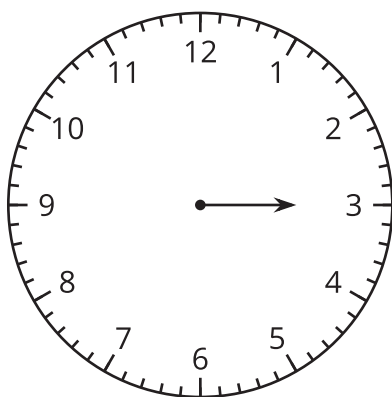
What time is shown on each clock?

- If the time is **half past**, color the clock red.
- If the time is **o'clock**, color the clock blue.

For the first 2 clocks, circle the time.

For the rest of the clocks, write the time. Use “o'clock” or “half past.”

1.

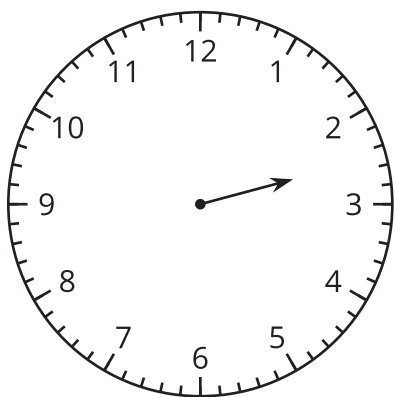


half past 2

3 o'clock

half past 3

2.

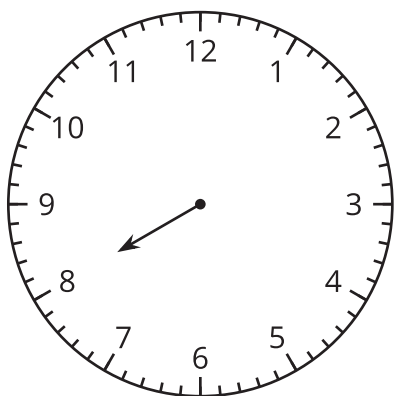


half past 2

3 o'clock

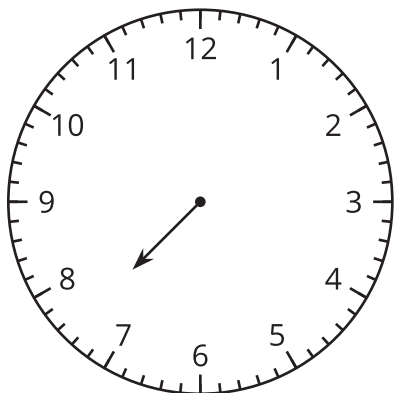
half past 3

3.



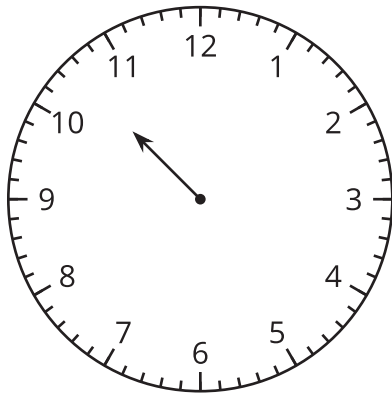
---

4.



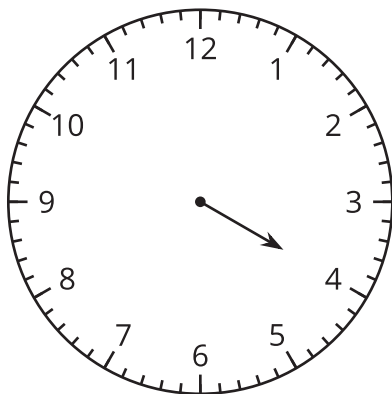
---

5.



---

6.



---



## Activity 3

### Notice and Wonder: The Hands on the Clock Go Round and Round

What do you notice?

What do you wonder?

